



Northwest Evaluation Association (NWEA) Measures of Academic Progress® (MAP®) creates a **personalized assessment experience** by adapting to each student’s learning level—precisely measuring student progress and growth for each individual. MAP is given via computer to children in grades K-12. Its structure is cross-grade, which provides measurement of students who perform on, above, and below grade level.

Free 7th Grade MAP Test Practice Questions

1. Select the sentence with all words spelled correctly.

a.

Ann likes to read storys about partys.

c.

The funny monkeys played with the toys.

b.

The wifes made delicious loafes of bread.

d.

The branchs sank from the weight of the snow.

2. Which sentence is NOT correct?

a.

His desire to complete the lesson himself has driven him to study carefully.

c.

This new class gave herself the confidence to write well.

b.

Gail was so upset about her grade on her essay that she signed herself up for a class in basic writing.

d.

I myself could use a course in writing.

3. Which sentence is capitalized correctly?

a.

“stop,” the officer commanded, “you must wait here.”

c.

“After practice,” coach said, “We are going to watch film.”

b.

“Before you go to the game,” Mom said, “you must clean your room.”

d.

“I ordered a pizza,” Bob said. “why don’t you order dessert?”

4.

Read the following label and answer the question.

<p>Multi-Vitamin Children 10 years of age to adults Take 1 capsule per day with a full glass of water to avoid stomach upset. Always take medication on a full stomach. Do not give to children under 10 years of age.</p>

What can happen if you do not take the vitamin with a full glass of water?

a. You may get sleepy.

c. The vitamin will not work.

b. You may get an upset stomach.

d. Children under 10 will get tired.

5. **Read the paragraph.**

Dogs are the best pets. They wag their tails when you come home. Dogs like to snuggle when you are watching television. They never get mad or talk back to you if you scold them. Dogs sometimes like to chase a ball, but they might also chase cats.

What is the author trying to persuade you to do or think?

a. watch more television

c. dogs wag their tails

b. a cat is a good pet

d. you should get a dog for a pet

6. **Read the letters.**

- A. I support a leash law at the community walking path. Even the gentlest dogs can become aggressive if they're threatened. Keep our citizens safe—use a leash!
 Dr. Maury Atchley
 Veterinarian
- B. A leash law is ridiculous. My dog is well trained and stays right on my heel as I jog. I vote no!
 Benjamin Goe
 Chairman, Running Club
- C. My classmates and I enjoy playing with the dogs down by the walking path. We have never met a mean dog. Don't deny us our rights!
 Sally Traynor
 8th Grader
- D. I support the leash law. I hate those dang dogs always running through my rose gardens. Keep them leashed!
 Harriet Mulner
 President, Rose Society

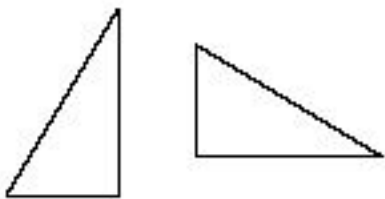
Which writer seems most qualified to judge whether or not the town should implement a “leash law?”

- | | |
|----------------------|-------------------|
| a. Dr. Maury Atchley | c. Sally Traynor |
| b. Benjamin Goe | d. Harriet Mulner |

7.

Geometry – Symmetry and Transformations – RIT 211 – 220

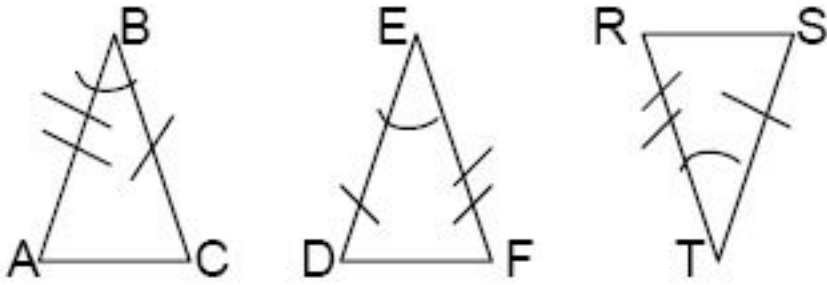
Identify the type of transformation.



- | | |
|----------------|--------------|
| a. translation | d. symmetry |
| b. rotation | e. congruent |
| c. reflection | |

8.

Geometry – Congruency and Similarity – RIT 221 – 230

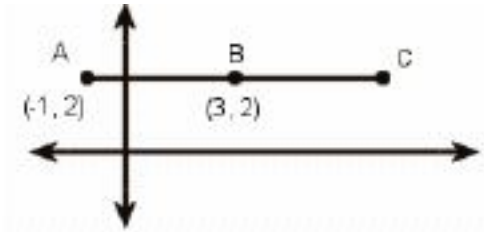


Which congruency statement is written correctly?

- a. $\triangle ABC \cong \triangle EDF$
- b. $\triangle ABC \cong \triangle RST$
- c. $\triangle DEF \cong \triangle STR$
- d. $\triangle ABC \cong \triangle DEF$
- e. $\triangle STR \cong \triangle DFE$

9.

If Point B is the midpoint of segment AC, what are the coordinates of Point C?



- a. (8,2)
- b. (2,7)
- c. (2,6)
- d. (6,2)
- e. (7,2)