


## 1.MD1.1

### Multiple Choice

Identify the choice that best completes the statement or answers the question.

1.

Which object is about 5  long?




a.



b.



2.

Which of the following is about 3  in height?



a.



b.



3.



Which is about the same size as



a.



b.



4.

Which one is about 4



in length?



a.



b.



5.



Which one is about 2 in height?



a.



b.



6.



Which one is about 3 in length?



a.



b.



7.



Which one is about  $2\frac{1}{2}$  in length?






8.



Which of these is the same height as 2 in length?



Answer 1: B  
 Answer 2: A  
 Answer 3: B  
 Answer 4: A  
 Answer 5: A  
 Answer 6: B  
 Answer 7: A  
 Answer 8: A