

1NBT1.1


Multiple Choice

Identify the choice that best completes the statement or answers the question.

1. Counting up by one, finish the following pattern. 116, _____, _____, _____, _____, _____

- a. 116,17,18,19,20,21
- b. 116,117,118,119,120,121
- c. 116,118,120,122,124,126
- d. 136,137,139,140,141,142

2. Count the colored squares. Find the number that represents the colored squares.




- a. 25
- b. 55
- c. 105
- d. 125

3. Count the objects. Find the number that represents those objects.



- a. 1,025
- b. 105
- c. 125
- d. 115

4. Count the objects. Find the number that represents those objects.




- a. 110
- b. 101
- c. 11
- d. 1,001

5. Count the number of dice. Find the number that represents how many dice are shown.




- a. 120
- b. 12
- c. 20
- d. 100

6. Count the number of shoes. Find the number that represents the number of shoes.



- a. 12
- b. 22
- c. 92
- d. 102

7. Count the number of bunnies. Find the number that represents the number of bunnies.



- a. $11 + 1$
- b. 1111
- c. 111
- d. 110

8. Counting up by one, finish the following pattern. 108, ____, ____, ____, ____, ____

- a. 108, 109, 110, 111, 112, 113
- b. 108, 109, 111, 112, 113, 114
- c. 108, 110, 112, 114, 116, 118
- d. 108, 190, 110, 111, 120, 121

9. Counting up by one, finish the following pattern. 199, ____, ____, ____, ____

- a. 199, 201, 202, 203, 204, 205
- b. 199, 198, 197, 196, 195, 194
- c. 99, 200, 201, 202, 203, 204
- d. 199, 200, 210, 220, 230, 240

10. Count the shirts. Find the number that represents those shirts.



- a. 33
- b. 103
- c. 43
- d. 53

- Answer 1: B
- Answer 2: C
- Answer 3: D
- Answer 4: B
- Answer 5: A
- Answer 6: C
- Answer 7: C

Answer 8: A
Answer 9: C
Answer 10: C