

10A1.1

Multiple Choice

Identify the choice that best completes the statement or answers the question.



Beth had 13 dolls. She got two more at the store. How many dolls does she have now?

$$13 + 2 = ?$$

- a. 15
- b. 12
- c. 11
- d. 14



My mom made 7 suckers on Monday. She made 12 more on Wednesday. How many suckers did my mom make altogether?

$$7 + 12 = ?$$

- a. 20
- b. 18
- c. 5
- d. 19



Brian had 19 hockey pucks. He gave some away to Glenn. Now Brian has 15 hockey pucks. How many hockey pucks did Brian give away?

$$19 - ? = 15$$


- a. 5
- b. 4
- c. 3
- d. 6



Berta had 6 goldfish and 12 clown fish in her tank. How many fish did she have altogether?

$$6 + 12 = ?$$


- a. 13
- b. 8
- c. 18
- d. 6



Aspen has 15 green blocks and 4 red blocks. How many blocks does she have altogether?

$$15 + 4 = ?$$

- a. 11
- b. 19
- c. 10
- d. 9



Aunt Beth got 15 flowers for her birthday. Then Uncle Barney got her some more flowers. Now she has 19 flowers. How many flowers did Uncle Barney give Aunt Beth?

$$15 + ? = 19$$

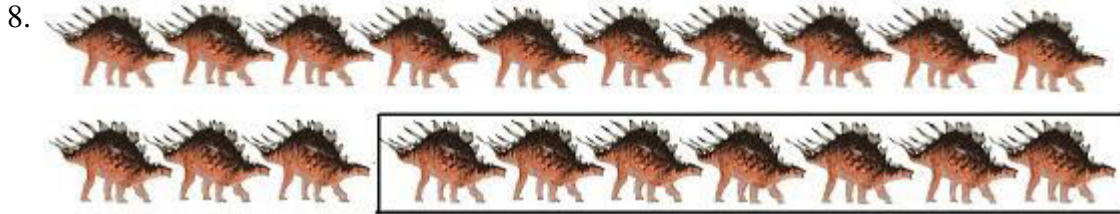
- a. 24
- b. 5
- c. 18
- d. 4



Bella has 16 cookies. She gave some of them away. She now has 11 cookies. How many cookies did she give away?

$$16 - ? = 11$$

- a. 20
- b. 6
- c. 5
- d. 21



Aaron had 20 dinosaur toys. He lost 7 of them. How many dinosaur toys does Aaron have left?

$$20 - 7 = ?$$

- a. 13
- b. 27
- c. 12
- d. 15



Joey made 15 balloons on Friday. His brother Mike popped 3 of them. How many balloons does he have left now?

$$15 - 3 = ?$$

- a. 17
- b. 12
- c. 18
- d. 11



Olivia drew 13 pictures of cats. She drew some dogs after that. Now Olivia has 20 pictures of dogs and cats altogether. How many pictures of dogs did she draw?

- a. 4
- b. 9
- c. 6
- d. 7

- Answer 1: A
- Answer 2: D
- Answer 3: B
- Answer 4: C
- Answer 5: B
- Answer 6: D
- Answer 7: C
- Answer 8: A
- Answer 9: B

Answer 10: D