

#### 4.G.3 TEST C1 Recognize a line of symmetry

##### Multiple Response

Identify *one or more* choices that best complete the statement or answer the question.

1. Which two figures have only one line of symmetry?



2. Which two figures have only zero line of symmetry?



3.

Which two figures have more lines of symmetry than the equilateral triangle?



4.

Which of these figures have the same number of lines of symmetry as the dragonfly?



b.




d.



5. Which two figures have more than five lines of symmetry?


a.



c.



b.

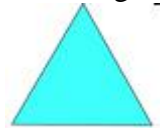


d.



6. Which two triangles have only one line of symmetry?

a.



c.



b.



d.



7. Which two objects have only one line of symmetry?

a.



c.



b.




d.



8. Which of these figures have only two lines of symmetry?

a.



c.



b.



d.



9. Which two figures have more than 4 lines of symmetry?

a.



b.



c.



d.



10.

Which figures have fewer lines of symmetry than the pentagon?

a.



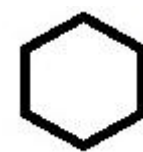
b.



c.



d.



Answer 1: A, B

Answer 2: A, C

Answer 3: A, B

Answer 4: B

Answer 5: B, c

Answer 6: C, D

Answer 7: A, D

Answer 8: D

Answer 9: C, D

Answer 10: A, C