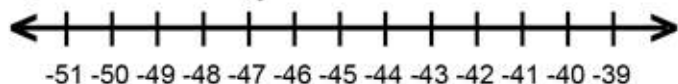


Name : \_\_\_\_\_ Score : \_\_\_\_\_

Teacher : \_\_\_\_\_ Date : \_\_\_\_\_

## Solve and Graph the Inequalities

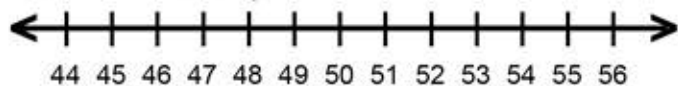
1)  $-11 > \frac{y}{4}$



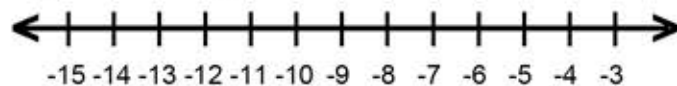
6)  $\frac{n}{6} \geq -6$



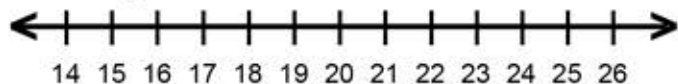
2)  $7 \geq \frac{g}{7}$



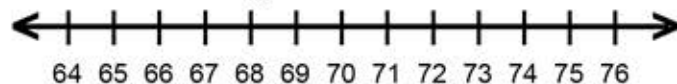
7)  $-2v \geq 12$



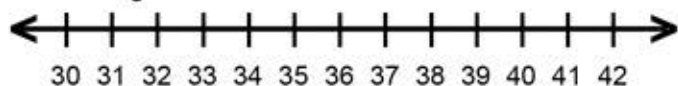
3)  $\frac{g}{3} \leq 8$



8)  $12 < \frac{k}{6}$



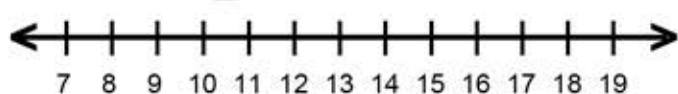
4)  $\frac{h}{3} < 11$



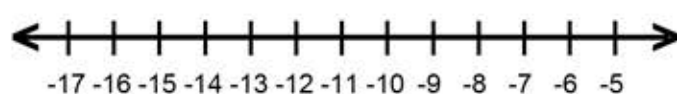
9)  $-24 > -6a$



5)  $3s \leq 39$



10)  $-18 < 2x$

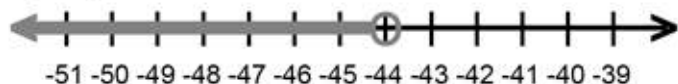


Name : \_\_\_\_\_ Score : \_\_\_\_\_

Teacher : \_\_\_\_\_ Date : \_\_\_\_\_

## Solve and Graph the Inequalities

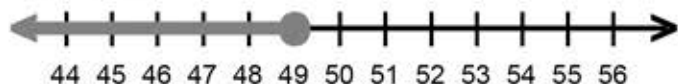
1)  $y < -44$



6)  $n \geq -36$




2)  $g \leq 49$



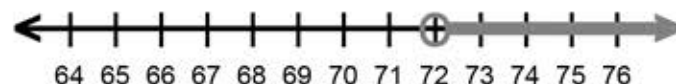
7)  $v \leq -6$



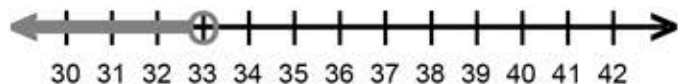
3)  $q \leq 24$



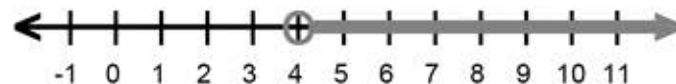
8)  $k > 72$



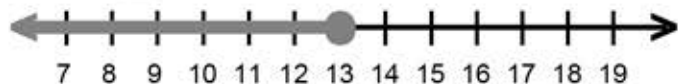
4)  $h < 33$



9)  $a > 4$



5)  $s \leq 13$



10)  $x > -9$

