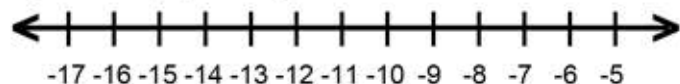


Name : _____ Score : _____

Teacher : _____ Date : _____

Solve and Graph the Inequalities

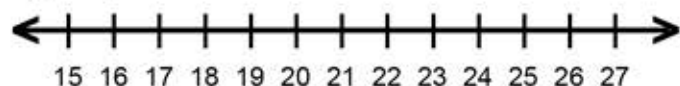
1) $-8 \geq 2 + j$



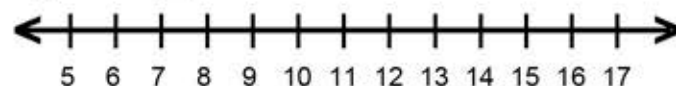
6) $-17 > 6 + y$



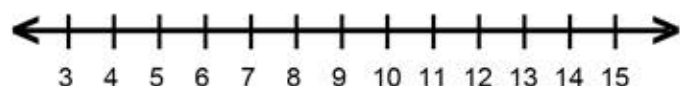
2) $p - 3 > 17$



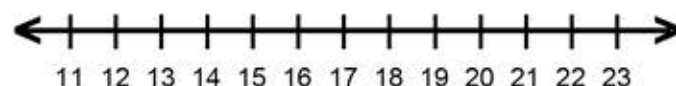
7) $12 \leq k + 1$



3) $5 < -8 + v$



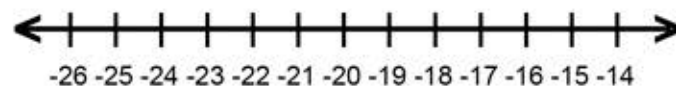
8) $18 < r - 3$



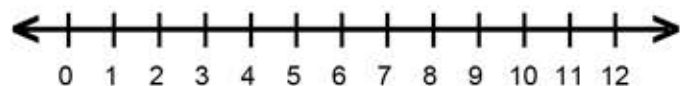
4) $-3 + b > 17$



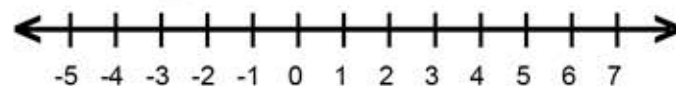
9) $4 + g \leq -18$



5) $-4 + f < 5$



10) $9 \geq n + 7$



Name : _____ Score : _____

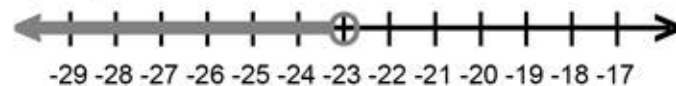
Teacher : _____ Date : _____

Solve and Graph the Inequalities

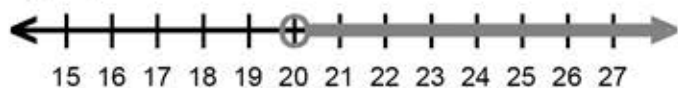
1) $j \leq -10$



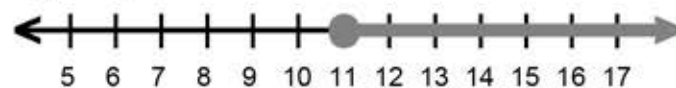
6) $y < -23$



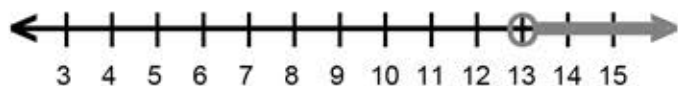
2) $p > 20$



7) $k \geq 11$



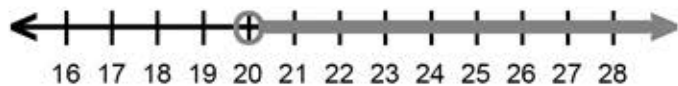
3) $v > 13$



8) $r > 21$



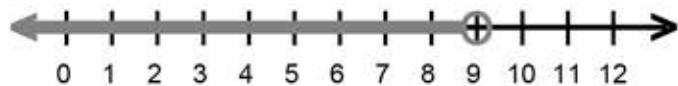
4) $b > 20$



9) $g \leq -22$



5) $f < 9$



10) $n \leq 2$

