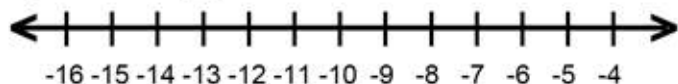


Name : _____ Score : _____

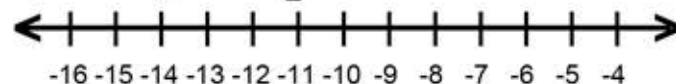
Teacher : _____ Date : _____

Solve and Graph the Inequalities

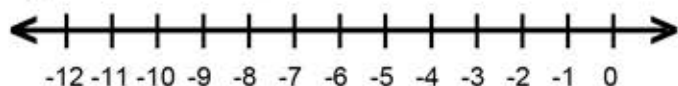
1) $-29 \leq 3v + 4$



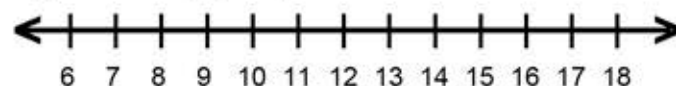
6) $-9 \leq -5 + \frac{h}{2}$



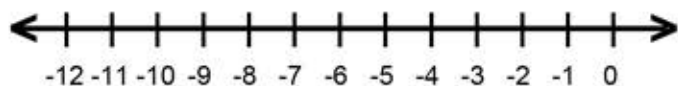
2) $2 + 3s < -25$



7) $22 \leq 2p + 6$



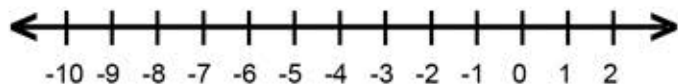
3) $2b + 5 < -15$



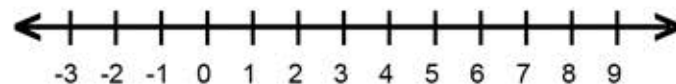
8) $3 + \frac{x}{6} > -6$



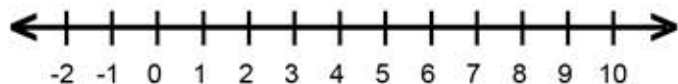
4) $-4 > 4 + 2r$



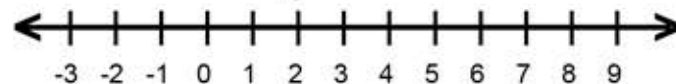
9) $5 + 3z \geq 26$



5) $29 < 4 + 5c$



10) $-5 > -5 + \frac{g}{4}$

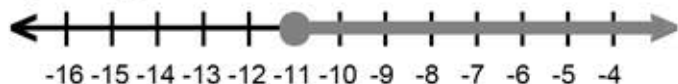


Name : _____ Score : _____

Teacher : _____ Date : _____

Solve and Graph the Inequalities

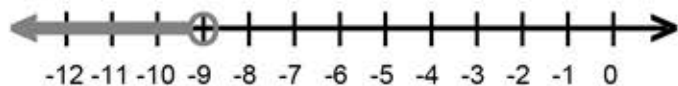
1) $v \geq -11$



6) $h \geq -8$



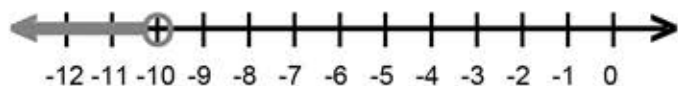
2) $s < -9$



7) $p \geq 8$



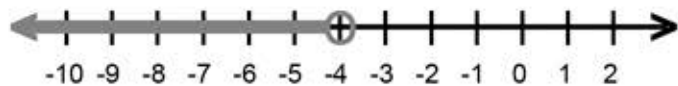
3) $b < -10$



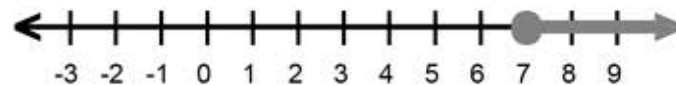
8) $x > -54$



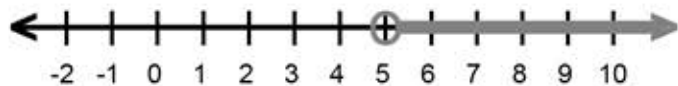
4) $r < -4$



9) $z \geq 7$



5) $c > 5$



10) $g < 0$

