

Name : \_\_\_\_\_

Score : \_\_\_\_\_

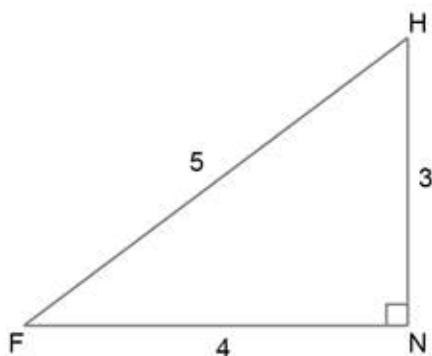
Teacher : \_\_\_\_\_

Date : \_\_\_\_\_

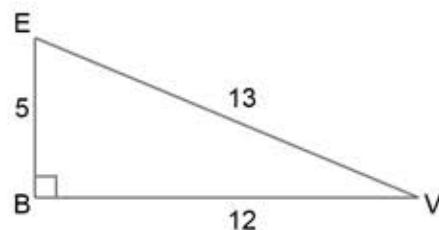
### Inverse Trigonometric Ratios

Find the measure of the indicated angle to the nearest degree.

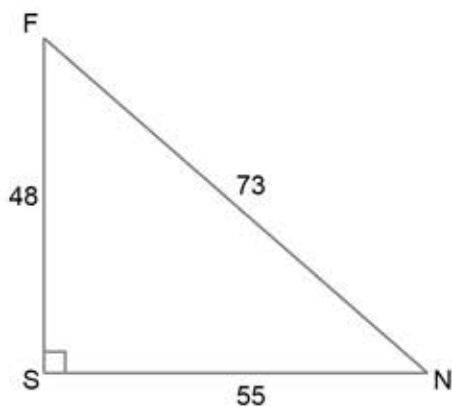
1)  $m\angle H = \underline{\hspace{2cm}}^\circ$



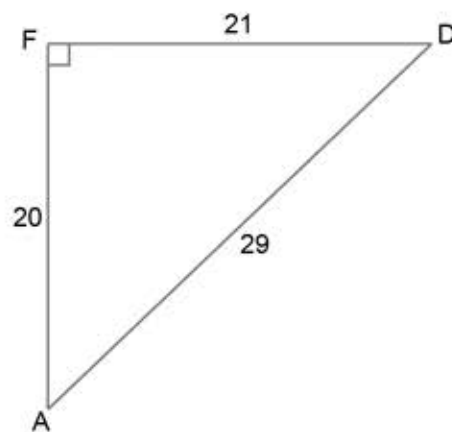
2)  $m\angle V = \underline{\hspace{2cm}}^\circ$



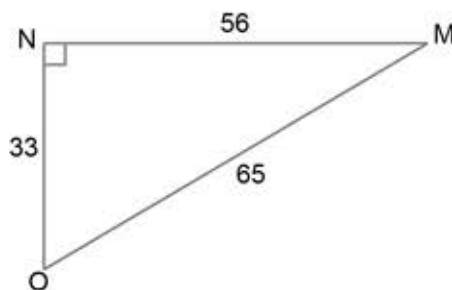
3)  $m\angle F = \underline{\hspace{2cm}}^\circ$



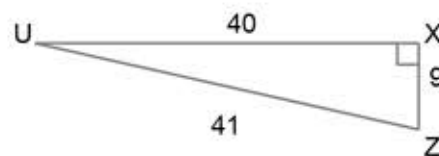
4)  $m\angle D = \underline{\hspace{2cm}}^\circ$



5)  $m\angle O = \underline{\hspace{2cm}}^\circ$



6)  $m\angle U = \underline{\hspace{2cm}}^\circ$



Name : \_\_\_\_\_

Score : \_\_\_\_\_

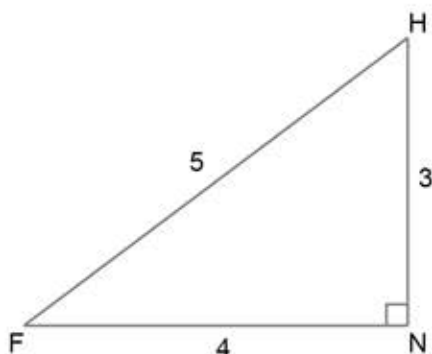
Teacher : \_\_\_\_\_

Date : \_\_\_\_\_

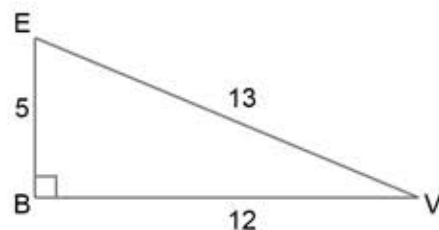
### Inverse Trigonometric Ratios

Find the measure of the indicated angle to the nearest degree.

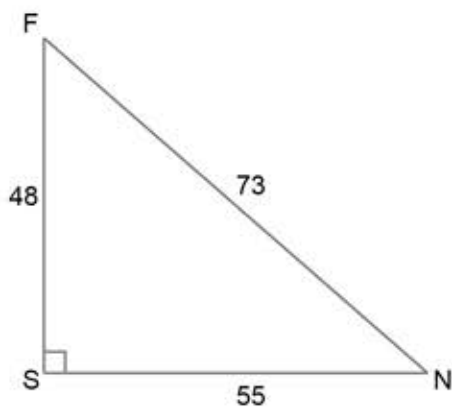
1)  $m\angle H = \underline{53}^\circ$



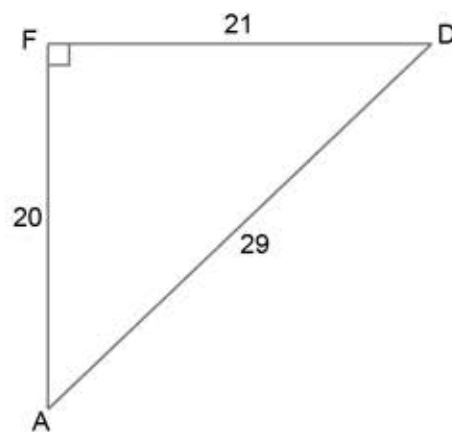
2)  $m\angle V = \underline{23}^\circ$



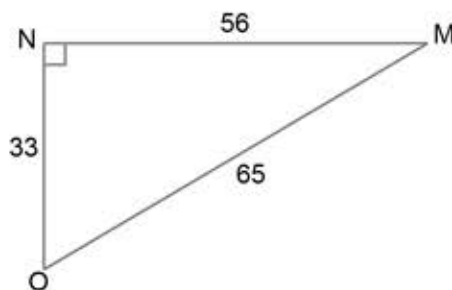
3)  $m\angle F = \underline{49}^\circ$



4)  $m\angle D = \underline{44}^\circ$



5)  $m\angle O = \underline{59}^\circ$



6)  $m\angle U = \underline{13}^\circ$

