

Name : _____

Score : _____

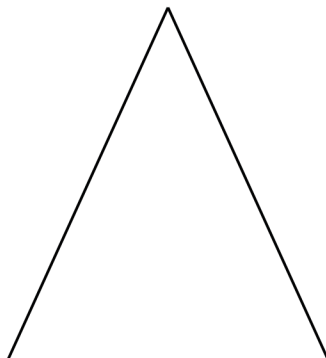
Teacher : _____

Date : _____

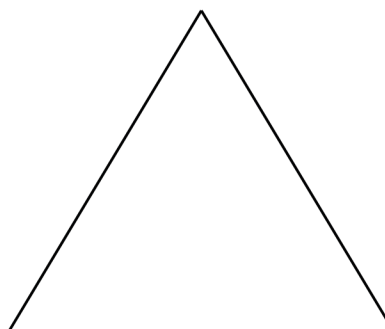
Angle Bisector Constructions

Locate the incenter of each triangle.

5)

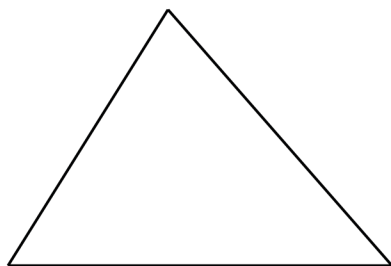


6)

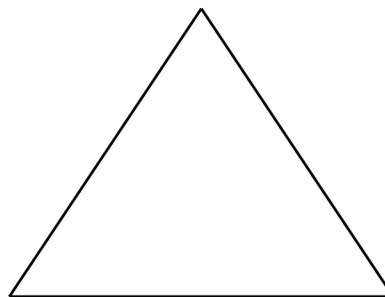


Construct all 3 angle bisectors in each triangle to show they are concurrent.

7)



8)



Name : _____

Score : _____

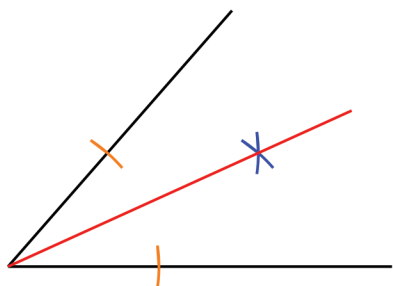
Teacher : _____

Date : _____

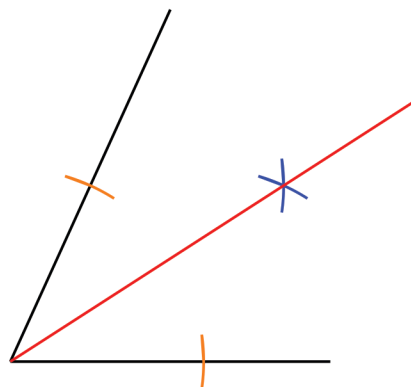
Angle Bisector Constructions

For each angle, construct the angle bisector.

1)

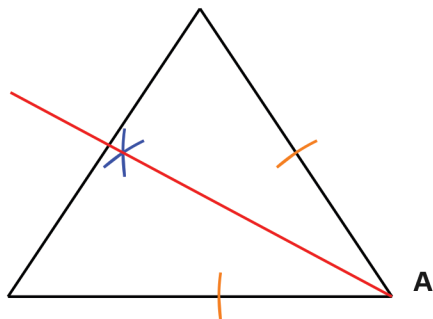


2)

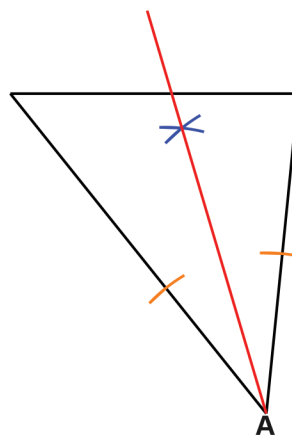


For each triangle, construct the angle bisector of angle A.

3)



4)



Name : _____

Score : _____


Teacher : _____

Date : _____

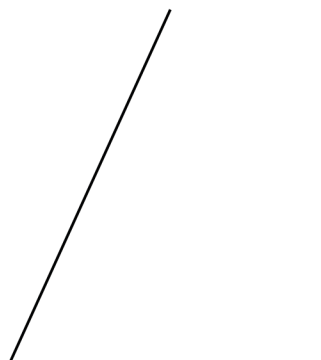
Angle Bisector Constructions

For each angle, construct the angle bisector.

1)

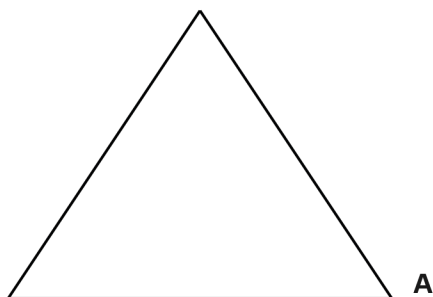


2)

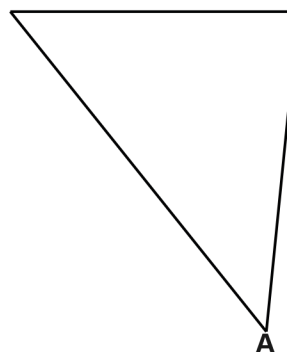


For each triangle, construct the angle bisector of angle A.

3)



4)



Name : _____

Score : _____

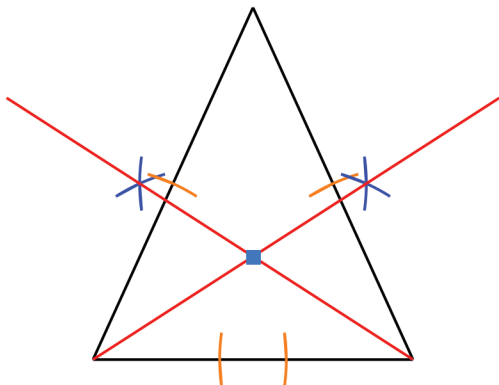
Teacher : _____

Date : _____

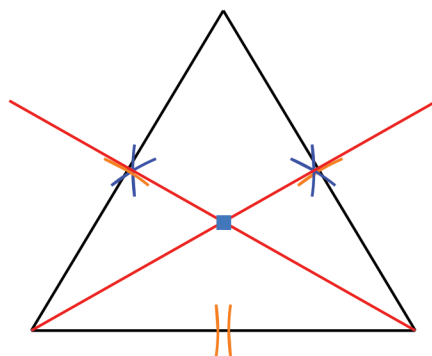
Angle Bisector Constructions

Locate the incenter of each triangle.

5)

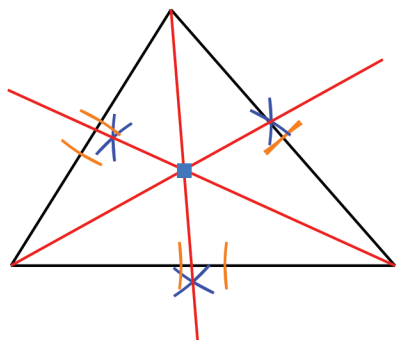


6)



Construct all 3 angle bisectors in each triangle to show they are concurrent.

7)



8)

