

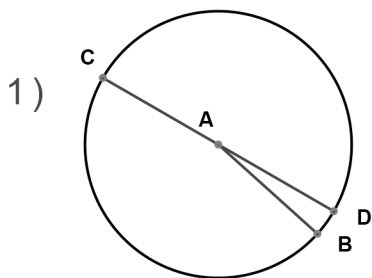
Name : _____

Score : _____

Teacher : _____

Date : _____

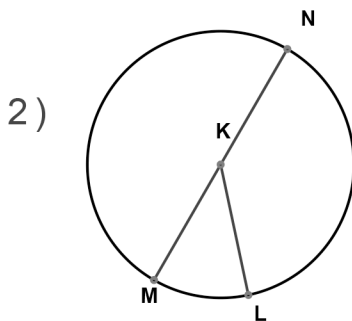
Identify the elements for each problem.



Circle: _____

Radius: _____

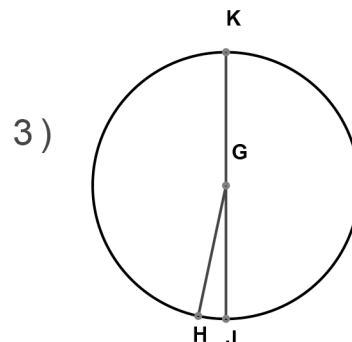
Diameter: _____



Circle: _____

Radius: _____

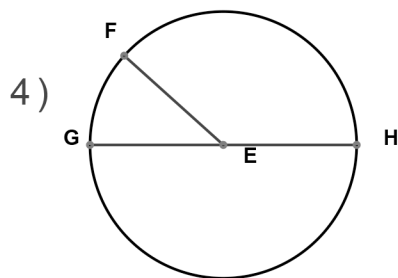
Diameter: _____



Circle: _____

Radius: _____

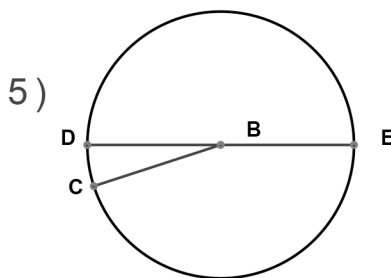
Diameter: _____



Circle: _____

Radius: _____

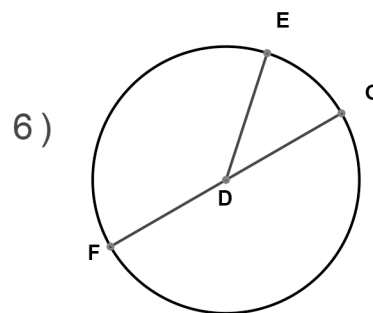
Diameter: _____



Circle: _____

Radius: _____

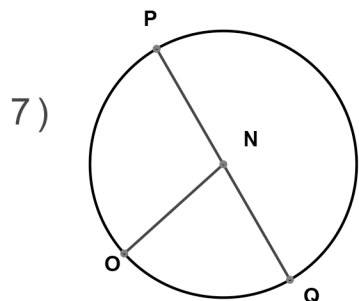
Diameter: _____



Circle: _____

Radius: _____

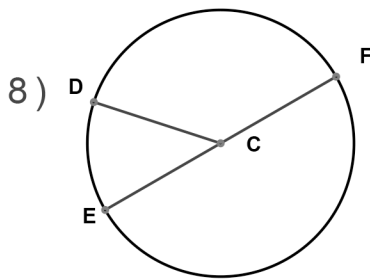
Diameter: _____



Circle: _____

Radius: _____

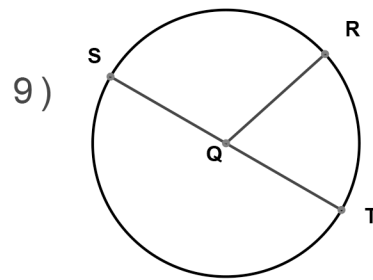
Diameter: _____



Circle: _____

Radius: _____

Diameter: _____



Circle: _____

Radius: _____

Diameter: _____



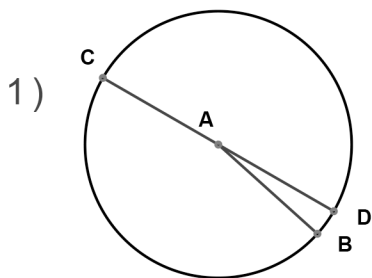
Name : _____

Score : _____

Teacher : _____

Date : _____

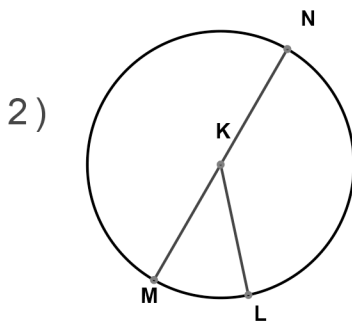
Identify the elements for each problem.



Circle: A

Radius: AB AC AD

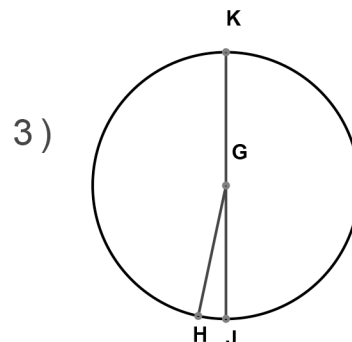
Diameter: CD



Circle: K

Radius: KL KM KN

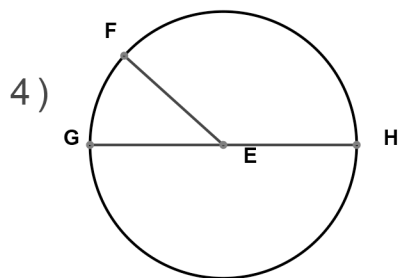
Diameter: MN



Circle: G

Radius: GH GJ GK

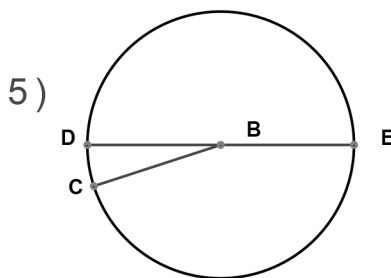
Diameter: JK



Circle: E

Radius: EF EG EH

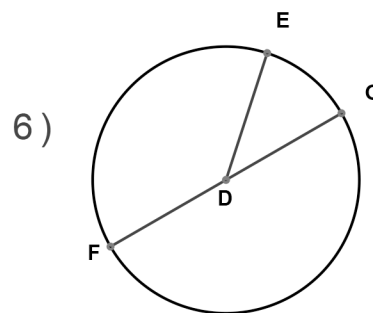
Diameter: GH



Circle: B

Radius: BC BD BE

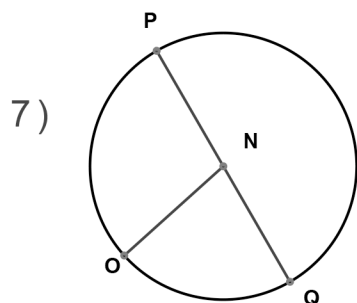
Diameter: DE



Circle: D

Radius: DE DF DG

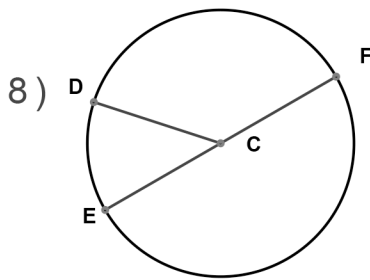
Diameter: FG



Circle: N

Radius: NO NP NQ

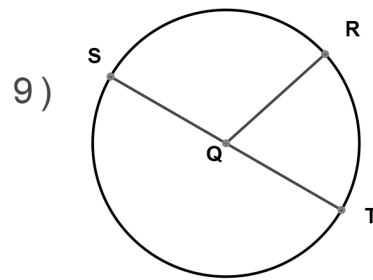
Diameter: PQ



Circle: C

Radius: CD CE CF

Diameter: EF



Circle: Q

Radius: QR QS QT

Diameter: ST

