

Name : \_\_\_\_\_

Score : \_\_\_\_\_

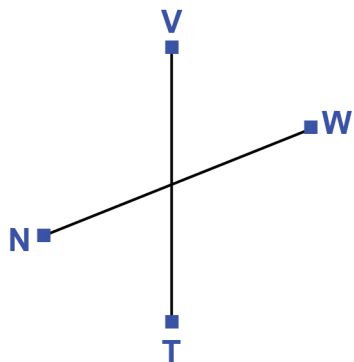
Teacher : \_\_\_\_\_

Date : \_\_\_\_\_

## Parallel, Perpendicular, and Intersecting Lines

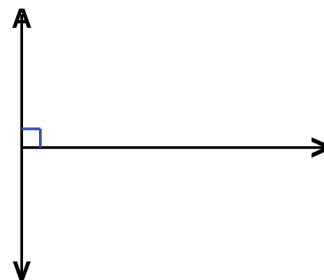
State whether the given pair of lines are parallel, perpendicular, or intersecting.

1)




Answer: \_\_\_\_\_

4)



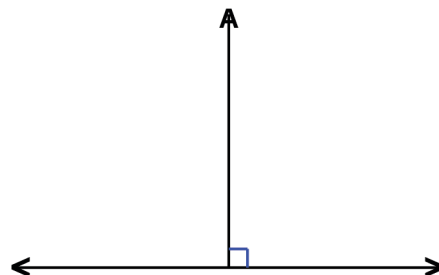
Answer: \_\_\_\_\_

2)



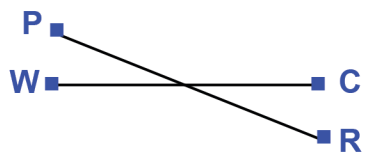
Answer: \_\_\_\_\_

5)



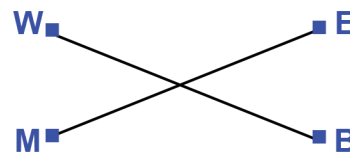
Answer: \_\_\_\_\_

3)



Answer: \_\_\_\_\_

6)



Answer: \_\_\_\_\_

Name : \_\_\_\_\_

Score : \_\_\_\_\_

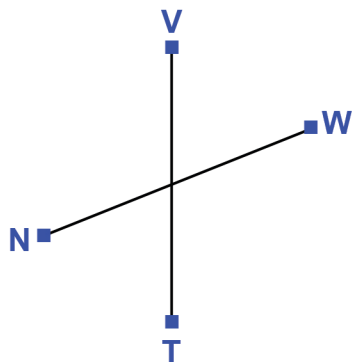
Teacher : \_\_\_\_\_

Date : \_\_\_\_\_

## Parallel, Perpendicular, and Intersecting Lines

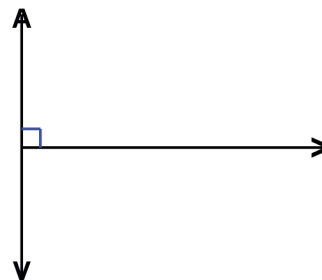
State whether the given pair of lines are parallel, perpendicular, or intersecting.

1)




Answer: Intersection

4)



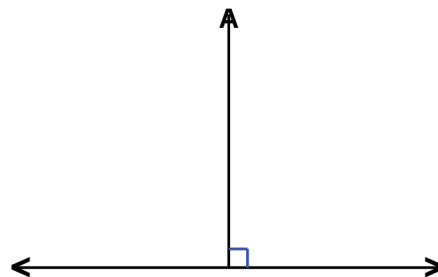
Answer: Perpendicular

2)



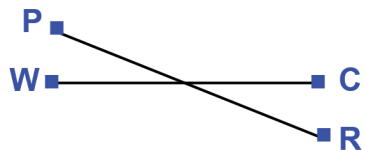
Answer: Parallel

5)



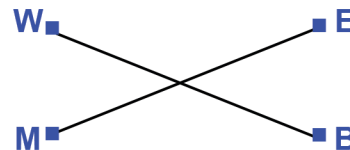
Answer: Perpendicular

3)



Answer: Intersection

6)



Answer: Intersection