

Name : _____

Score : _____

Teacher : _____

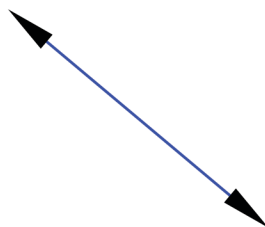
Date : _____

Identify the Lines, Rays or Line Segments.


1)



2)




3)




4)




5)



6)



7)



8)



9)



Name : _____

Score : _____

Teacher : _____

Date : _____

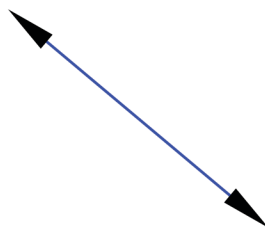
Identify the Lines, Rays or Line Segments.

1)



Line Segment

2)



Line

3)




Ray

4)




Line Segment

5)




Line Segment

6)



Ray

7)



Ray

8)



Ray

9)



Line