

Name : _____

Score : _____


Teacher : _____


Date : _____


Measuring Line Segments

How many Inches ?

1)  _____

2)  _____

3)  _____

4)  _____

5)  _____

6)  _____

7)  _____

8)  _____

9)  _____

10)  _____

11)  _____

12)  _____

13)  _____

14)  _____

15)  _____

Name : _____

Score : _____

Teacher : _____

Date : _____

Measuring Line Segments

How many Inches ?



1 $\frac{5}{8}$ in



2 $\frac{1}{8}$ in



2 $\frac{3}{8}$ in



2 $\frac{7}{8}$ in



$\frac{7}{8}$ in



5 $\frac{1}{2}$ in



1 $\frac{1}{8}$ in



4 $\frac{1}{4}$ in



1 $\frac{1}{4}$ in



$\frac{1}{8}$ in



3 $\frac{7}{8}$ in



5 $\frac{3}{8}$ in



3 $\frac{5}{8}$ in



$\frac{1}{4}$ in



2 in