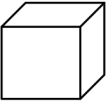



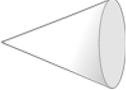


Name \_\_\_\_\_

Date \_\_\_\_\_

1. Go on a scavenger hunt for 3-dimensional shapes. Look for objects at home that would fit in the chart below. Try to find at least four objects for each shape.

Cube 	Rectangular Prism 	Cylinder 	Sphere 	Cone 

2. Choose one object from each column. Explain how you know that object belongs in that column. Use the word bank if needed.

Word Bank

faces	circle	square	roll	six
sides	rectangle	point	flat	

a. I put the \_\_\_\_\_ in the cube column because

\_\_\_\_\_ .

b. I put the \_\_\_\_\_ in the cylinder column because

\_\_\_\_\_ .

c. I put the \_\_\_\_\_ in the sphere column because

\_\_\_\_\_ .

d. I put the \_\_\_\_\_ in the cone column because

\_\_\_\_\_ .

e. I put the \_\_\_\_\_ in the rectangular prism column because

\_\_\_\_\_ .

## Answer Key

1. Answers may vary.
2. Answers may vary.