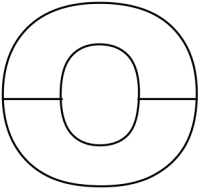

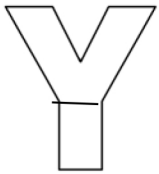
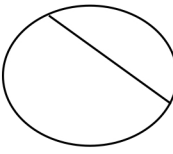
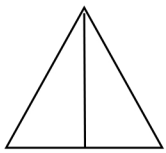
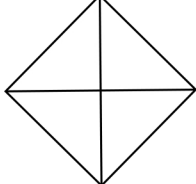
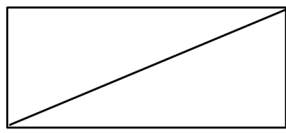
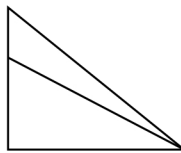
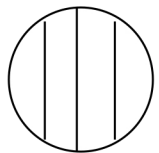
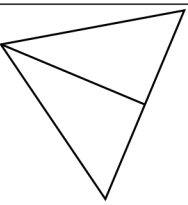
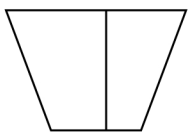
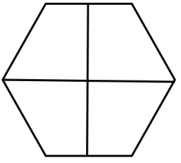
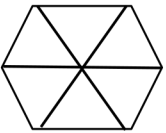




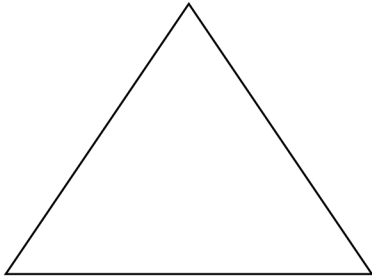
Name \_\_\_\_\_

Date \_\_\_\_\_

1. Are the shapes divided into equal parts? Write **Y** for yes or **N** for no. If the shape has equal parts, write how many equal parts there are on the line. The first one has been done for you.


a.  <b>y</b> <b>2</b> _____	b.  _____	c.  _____
d.  _____	e.  _____	f.  _____
g.  _____	h.  _____	i.  _____
j.  _____	k.  _____	l.  _____
m.  _____	n.  _____	o.  _____

2. Draw 1 line to make 2 equal parts. What smaller shapes did you make?



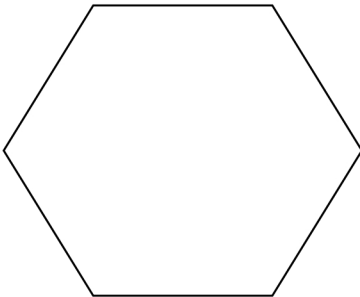
I made 2 \_\_\_\_\_.

3. Draw 2 lines to make 4 equal parts. What smaller shapes did you make?



I made 4 \_\_\_\_\_.

4. Draw lines to make 6 equal parts. What smaller shapes did you make?



I made 6 \_\_\_\_\_.

## Answer Key

1. 

a. Y, 2	f. Y, 4	k. N
b. Y, 2	g. Y, 2	l. Y, 4
c. N	h. N	m. Y, 6
d. N	i. N	n. Y, 2
e. Y, 2	j. Y, 2	o. N
2. Line drawn accurately; triangles
3. Line drawn accurately; answers will vary.
4. Lines drawn accurately; triangles