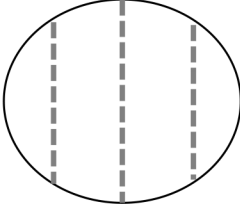
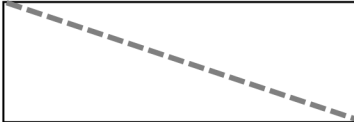
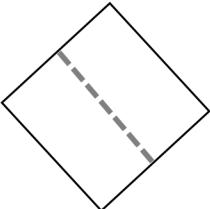

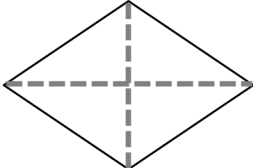
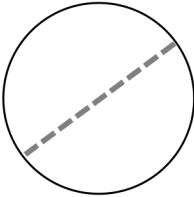
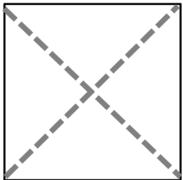



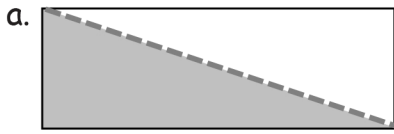
Name _____

Date _____

1. Circle the correct word(s) to tell how each shape is divided.

<p>a.</p>  <p>equal parts unequal parts</p>	<p>b.</p>  <p>equal parts unequal parts</p>
<p>c.</p>  <p>halves fourths</p>	<p>d.</p>  <p>halves quarters</p>
<p>e.</p>  <p>halves quarters</p>	<p>f.</p>  <p>fourths halves</p>
<p>g.</p>  <p>quarters halves</p>	<p>h.</p>  <p>halves fourths</p>

2. What part of the shape is shaded? Circle the correct answer.



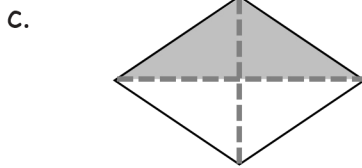
1 half

1 quarter

b. 

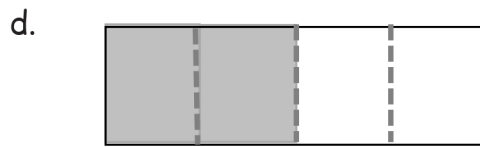
1 half

1 quarter



1 half

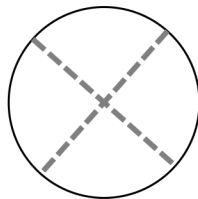
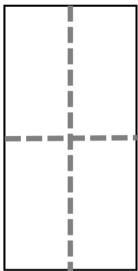
1 quarter



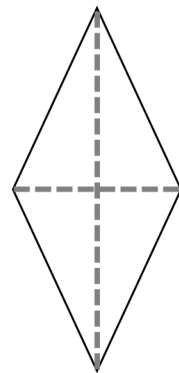
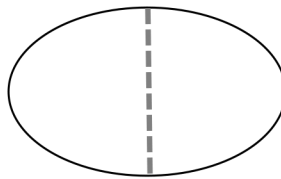
1 half

1 quarter

3. Color 1 quarter of each shape.



4. Color 1 half of each shape.



Answer Key

1.
 - a. Unequal parts
 - b. Equal parts
 - c. Halves
 - d. Quarters
 - e. Quarters
 - f. Halves
 - g. Quarters
 - h. Fourths
2.
 - a. 1 half
 - b. 1 quarter
 - c. 1 half
 - d. 1 half
3. Answers may vary.
4. Answers may vary.