

Name _____

Date _____


1. The string that measures the path from the garden to the tree is longer than the path between the tree and the flowers. Circle the shorter path.

the garden to the tree

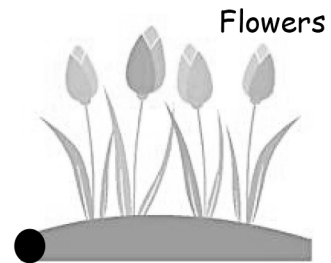
the tree to the flowers



Garden

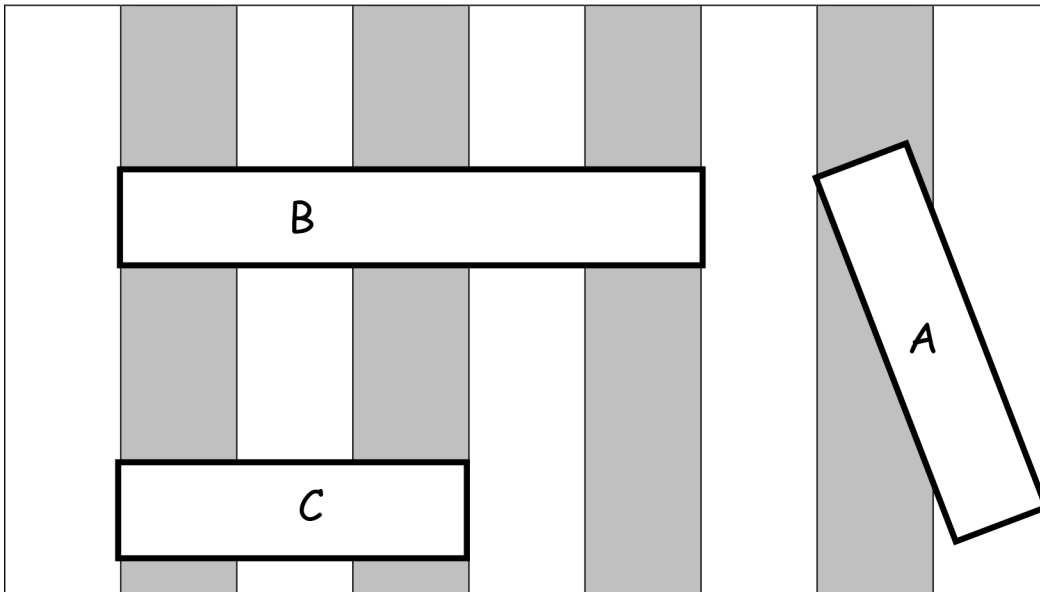


Tree



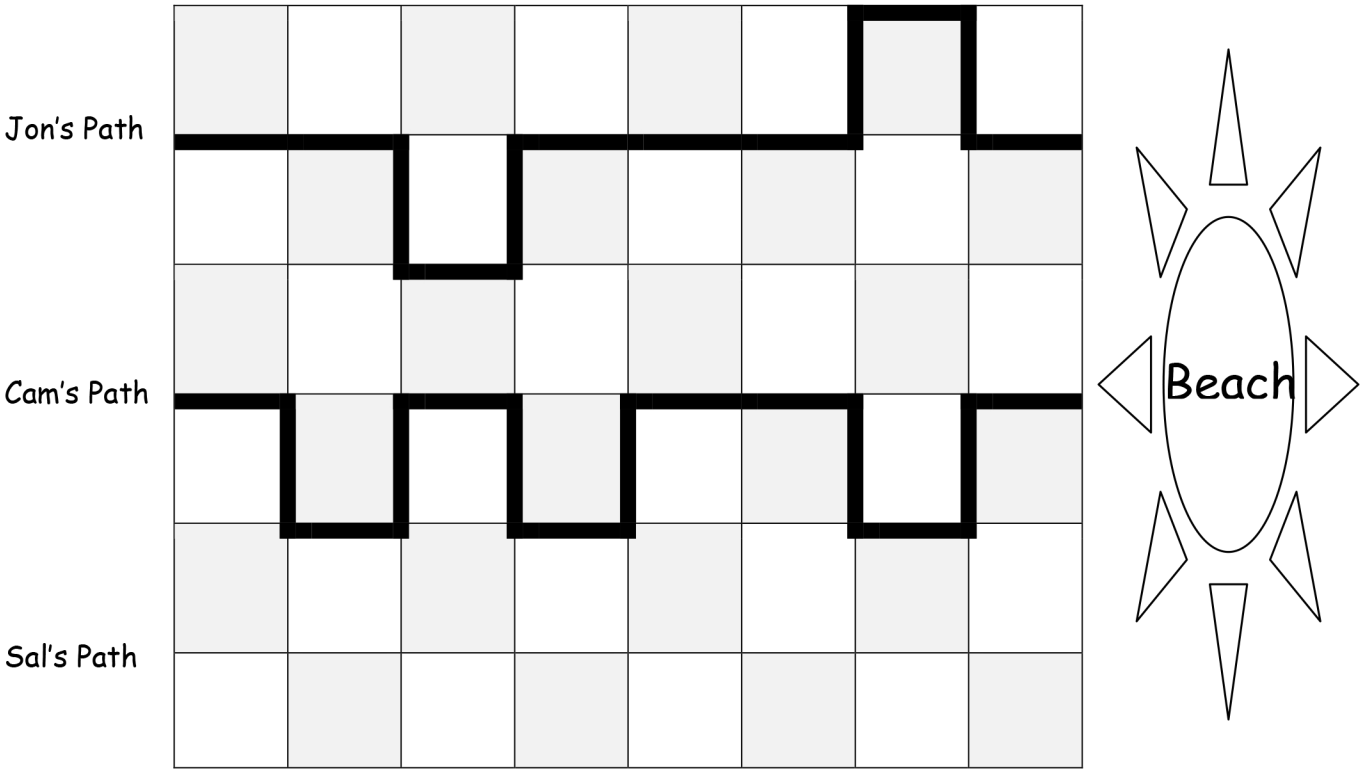
Flowers

Use the picture to answer the questions about the rectangles.



2. Which is the longest rectangle? _____
3. If Rectangle A is longer than Rectangle C, the shortest rectangle is _____.
4. Order the rectangles from shortest to longest.

Use the picture to answer the questions about the children's paths to the beach.



5. How long is Jon's path to the beach? _____ blocks
6. How long is Cam's path to the beach? _____ blocks
7. Jon's path is longer than Sal's path. Draw Sal's path.
- Circle the correct word to make the statement true.
8. Cam's path is **longer/shorter than** Sal's path.
9. Who took the shortest path to the beach? _____
10. Order the paths from shortest to longest.

Answer Key

1. Path between the tree to the flowers
2. B
3. C
4. C, A, B
5. 12
6. 14
7. Line drawn on picture showing 8, 9, 10 or 11 blocks
8. Longer
9. Sal
10. Sal, Jon, Cam