


Name \_\_\_\_\_

Date \_\_\_\_\_

Measure the length of each picture with your cubes.  
Complete the statements below.

1. The lollipop is \_\_\_\_\_ centimeter cubes long.




2. The stamp is \_\_\_\_\_ centimeter cubes long.

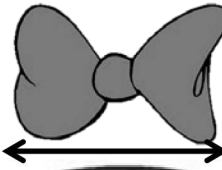
3. The purse is \_\_\_\_\_ centimeter cubes long.



4. The candle is \_\_\_\_\_ centimeter cubes long.



5. The bow is \_\_\_\_\_ centimeter cubes long.



6. The cookie is \_\_\_\_\_ centimeter cubes long.



7. The mug is \_\_\_\_\_ centimeter cubes long.



8. The ketchup is about \_\_\_\_\_ centimeter cubes long.

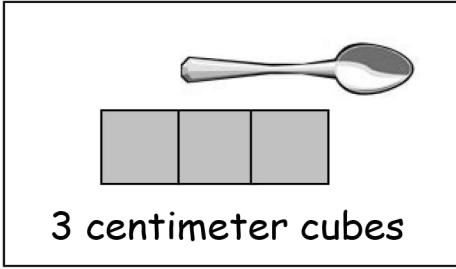


9. The envelope is about \_\_\_\_\_ centimeter cubes long.

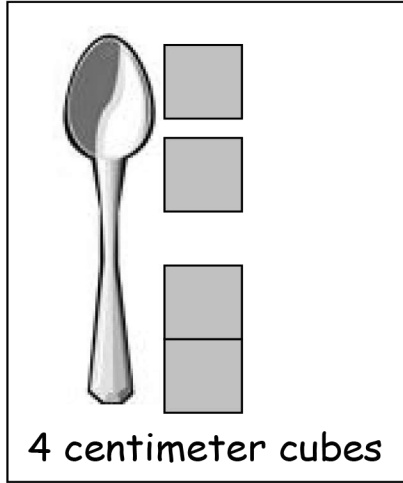


10. Circle the picture that shows the correct way to measure.


A



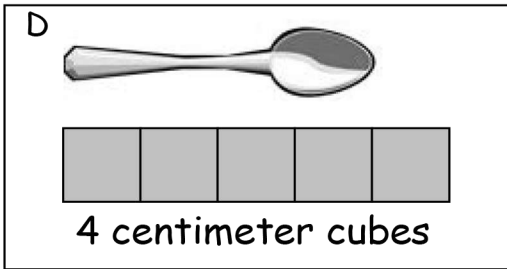
B



C



D



11. Explain what is wrong with the measurements for the pictures you did NOT circle.

---

---

---

## Answer Key

1. 4
2. 5
3. 5
4. 7
5. 3
6. 5
7. 3
8. 5
9. 4
10. Picture D is circled
11. Answers may vary.