

Name \_\_\_\_\_

Date \_\_\_\_\_

1. Match the label to the correct coins and write the value. There will be more than one match for each coin name.

a.

**nickel**

\_\_\_\_\_ cents

b.

**dime**

\_\_\_\_\_ cents

c.

**quarter**

\_\_\_\_\_ cents

d.

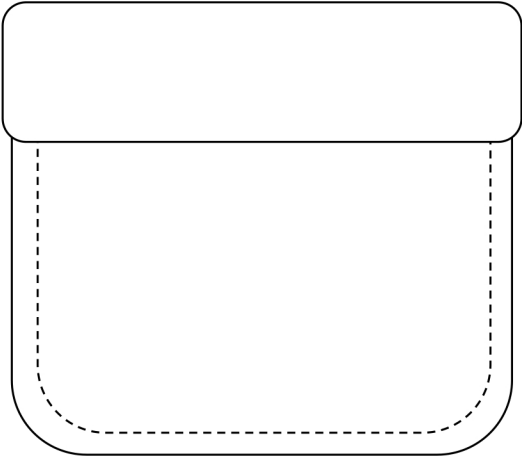
**penny**

\_\_\_\_\_ cent

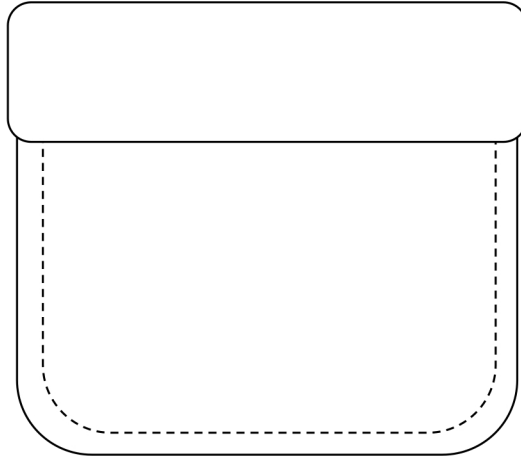


2. Lee has one coin in his pocket and Pedro has 3 coins. Pedro has more money than Lee. Draw a picture to show the coins each boy might have.

Lee's pocket

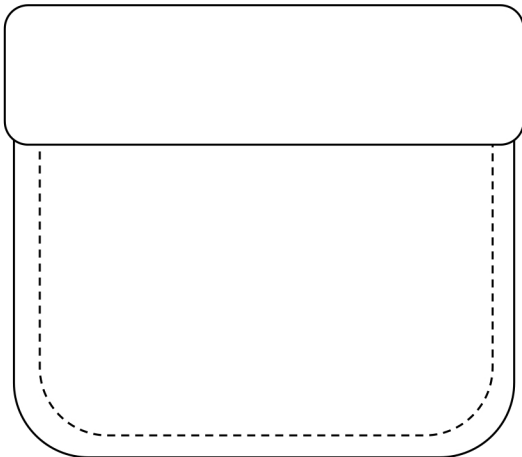


Pedro's pocket

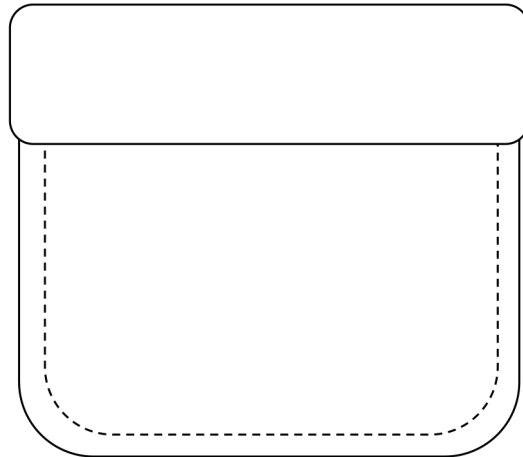


3. Bailey has 4 coins in her pocket and Ingrid has 4 coins. Ingrid has more money than Bailey. Draw a picture to show the coins each girl might have.

Bailey's pocket



Ingrid's pocket



## Answer Key

1.
  - a. 5, matched with nickels
  - b. 10, matched with dimes
  - c. 25, matched with quarters
  - d. 1, matched with pennies
2. Answers will vary.
3. Answers will vary.