



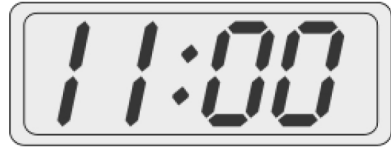
Name \_\_\_\_\_

Date \_\_\_\_\_


1. Match each clock to the time it shows.



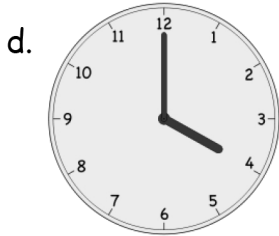
4 o'clock



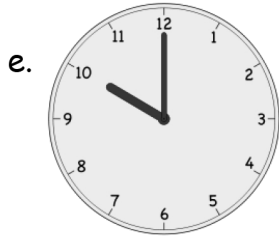
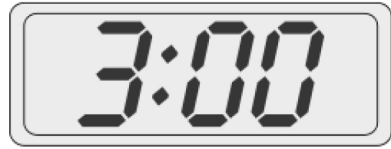
7 o'clock



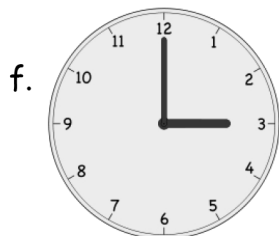
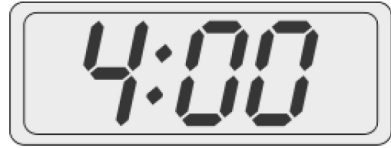
11 o'clock



10 o'clock



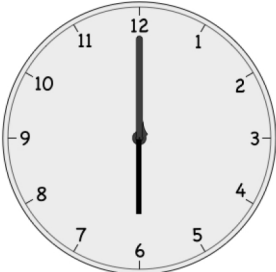
3 o'clock





2 o'clock




2. Put the hour hand on the clock so that the clock matches the time. Then, write the time on the line.

a.  6 o'clock 6:00

b.  9 o'clock \_\_\_\_\_

c.  12 o'clock \_\_\_\_\_

d.  7 o'clock \_\_\_\_\_

e.  1 o'clock \_\_\_\_\_

## Answer Key

1.
  - a. 2 o'clock, 2:00
  - b. 7 o'clock, 7:00
  - c. 11 o'clock, 11:00
  - d. 4 o'clock, 4:00
  - e. 10 o'clock, 10:00
  - f. 3 o'clock, 3:00
2.
  - a. Answer provided
  - b. Hand pointing to 9, 9:00
  - c. Hand pointing to 12, 12:00
  - d. Hand pointing to 7, 7:00
  - e. Hand pointing to 1, 1:00