


Name \_\_\_\_\_

Date \_\_\_\_\_


Write the time shown on the clock, or draw the missing hand(s) on the clock.

1.



10 o'clock

2.




half past 10 o'clock

3.




8 o'clock

4.



\_\_\_\_\_

5.



3 o'clock

6.



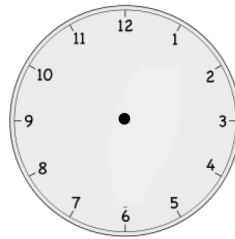
half past 3 o'clock

7.



\_\_\_\_\_

8.



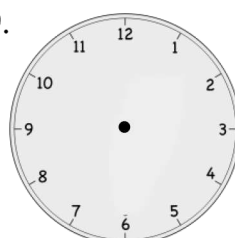
half past 6 o'clock

9.



half past 9 o'clock

10.





4 o'clock


11. Match the pictures with the clocks.



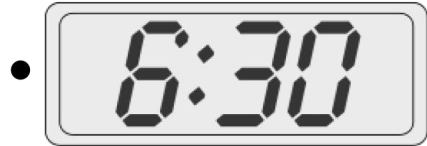
Soccer practice  
3:30




Brush teeth  
7:30




Wash dishes  
6:00




Eat dinner  
5:30



Take bus home  
4:30



Homework  
half past 6 o'clock



## Answer Key

1. Hour hand at 10, minute hand at 12
2. Minute hand at 6
3. Hour hand at 8
4. 6:30 or half past 6 o'clock
5. Hour hand at 3, minute hand at 12
6. Minute hand at 6
7. 2:00 or two o'clock
8. Hour hand between 6 and 7, minute hand at 6
9. Minute hand at 6
10. Hour hand at 4, minute hand at 12
11.
  - a. 3:30—second clock
  - b. 7:30—sixth clock
  - c. 6:00—fifth clock
  - d. 5:30—first clock
  - e. 4:30—fourth clock
  - f. Half past 6 o'clock—third clock