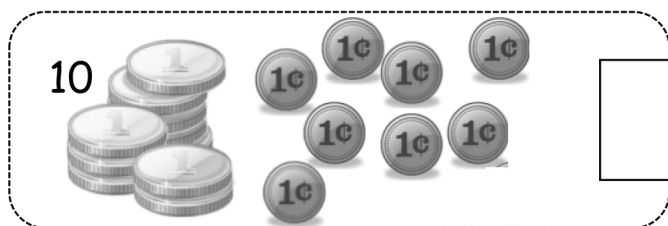


Name _____

Date _____

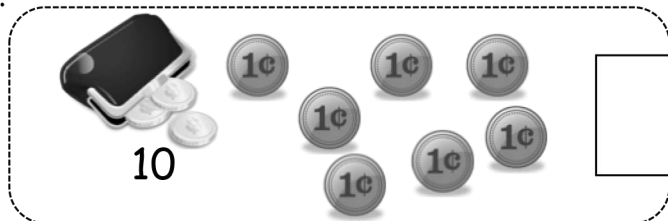
Circle **ten**. Write the number. How many **tens** and **ones**?

1.



is the same as
_____ ten and _____ ones.

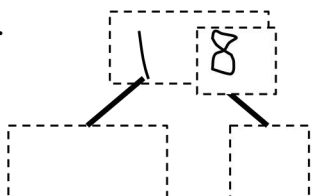
2.



is the same as
_____ ones and _____ ten.

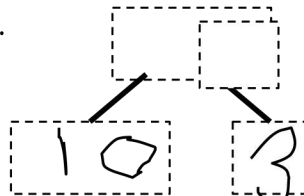
Use the Hide Zero pictures to draw the ten and ones shown on the cards.

3.

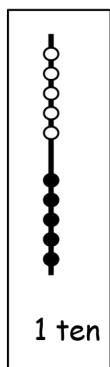


_____ ten and _____ ones

4.

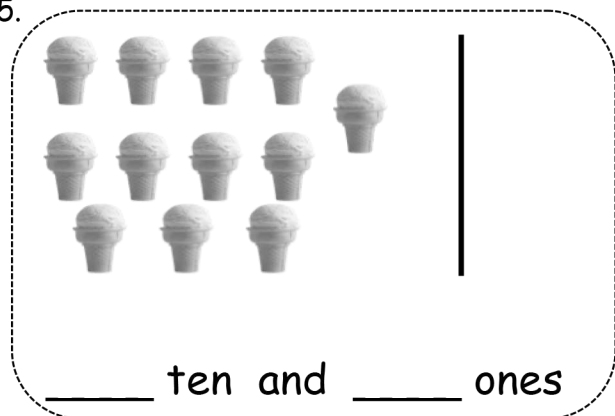


_____ ten and _____ ones

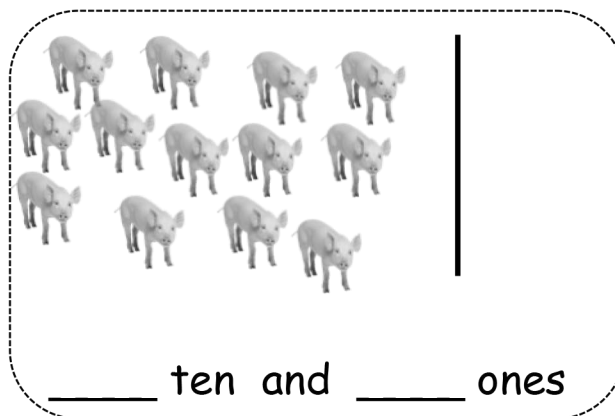


Draw using 5-groups columns to show the tens and ones.

5.



6.



Draw your own examples using 5-groups columns to show the tens and ones.

7.

16



16 is the same as

_____ ten and _____ ones.

8.

19



19 is the same as

_____ ones and _____ ten.

Answer Key

1. Pile of 10 coins circled; 18; 1, 8
2. Purse of coins circled; 17; 1, 7
3. Circles drawn to show 18; 10, 8; 1, 8
4. Circles drawn to show 13; 13; 1, 3
5. Circles drawn to show 12; 1, 2
6. Circles drawn to show 13; 1, 3
7. 5-group column, circles drawn to show 16; 6, 1
8. 5-group column, circles drawn to show 19; 1, 9