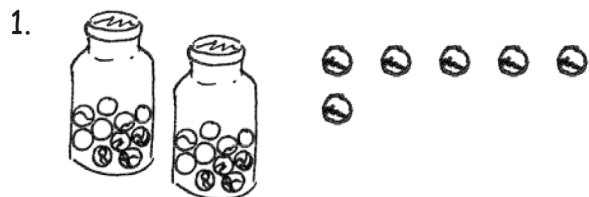


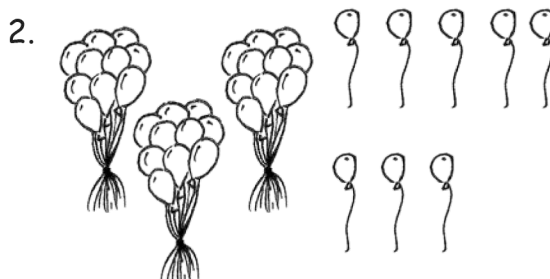
Name _____

Date _____

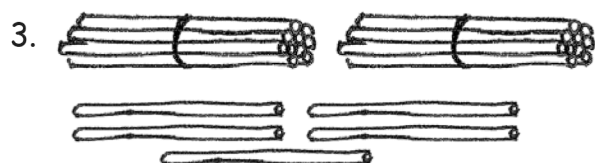
Circle groups of 10. Write the number to show the total amount of objects.



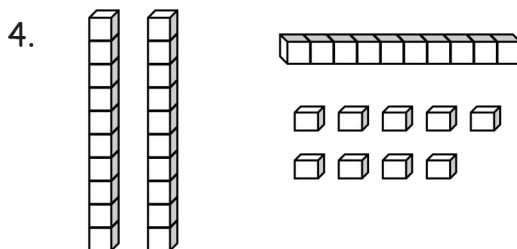
There are _____ marbles.



There are _____ balloons.

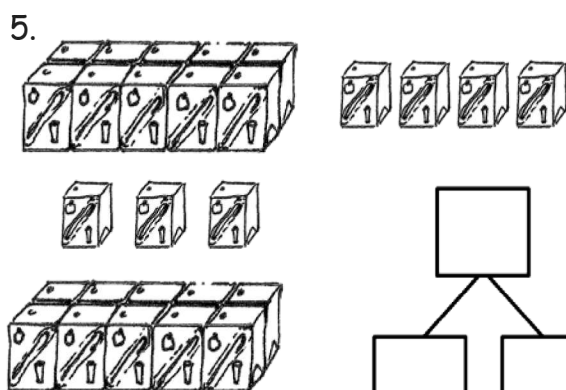


There are _____ straws.

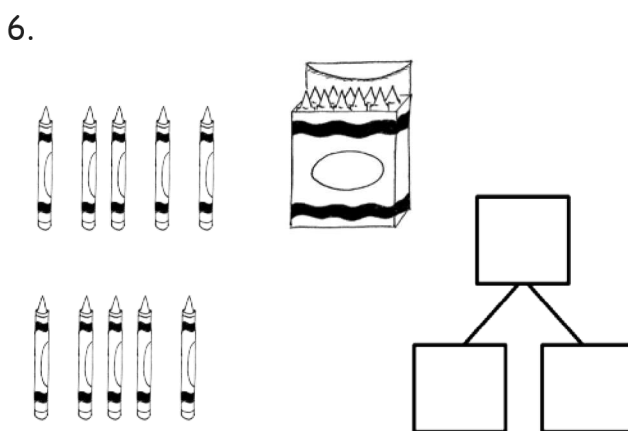


There are _____ cubes.

Make a number bond to show tens and ones. Circle tens to help. Write the number to show the total amount of objects.

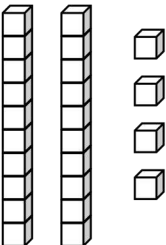
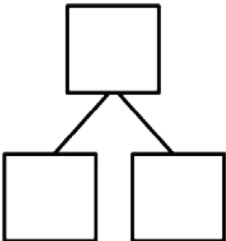
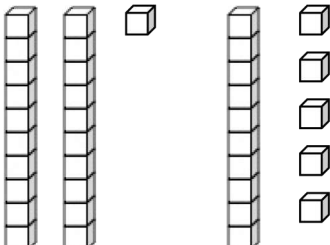
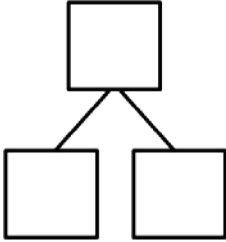
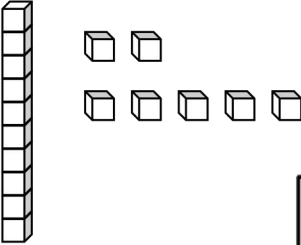
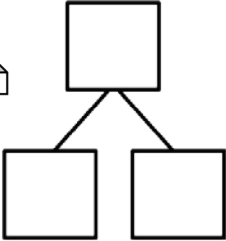
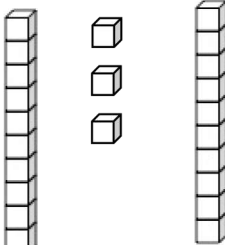
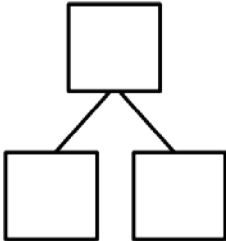


There are _____ juice boxes.

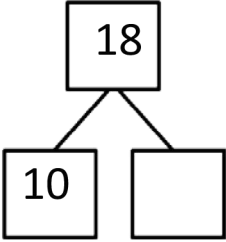
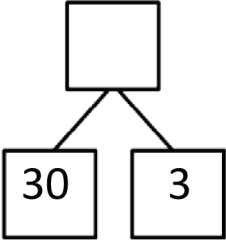



There are _____ crayons.

Make a number bond to show tens and ones. Circle tens to help. Write the number to show the total amount of objects.

<p>7.</p>   <p>There are _____ cubes.</p>	<p>8.</p>   <p>There are _____ cubes.</p>
<p>9.</p>   <p>There are _____ cubes.</p>	<p>10.</p>   <p>There are _____ cubes.</p>

Make or complete a math drawing to show tens and ones. Complete the number bonds.

<p>11.</p> 	<p>12.</p>  
--	---

Answer Key

1. Groups of 10 circled; 26
2. Groups of 10 circled; 38
3. Groups of 10 circled; 25
4. Groups of 10 circled; 39
5. Groups of 10 circled; 20 and 7 is 27; 27
6. Groups of 10 circled; 10 and 10 is 20; 20
7. Groups of 10 circled; 20 and 4 is 24; 24
8. Groups of 10 circled; 30 and 6 is 36; 36
9. Groups of 10 circled; 10 and 7 is 17; 17
10. Groups of 10 circled; 20 and 3 is 23; 23
11. Picture of 10 and 8 drawn; 8
12. Picture of 10 more and 3 more drawn; 33