
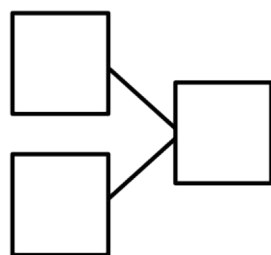


Name _____

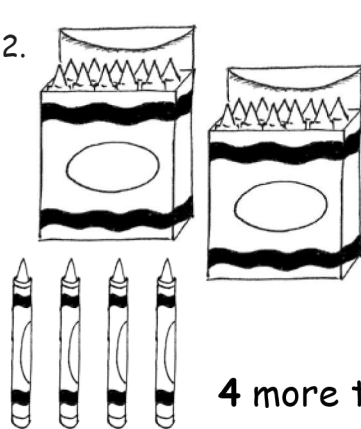
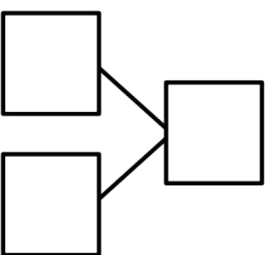
Date _____

Fill in the number bond or write the tens and ones. Complete the addition sentences.

1.  

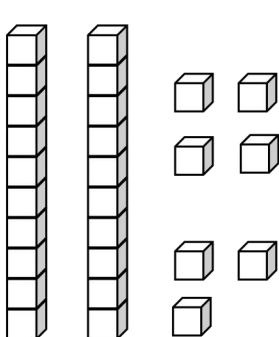
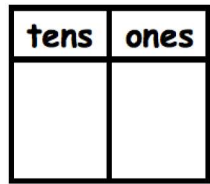
$3 + 20 = \underline{\quad}$

20 more than 3 is $\underline{\quad}$.

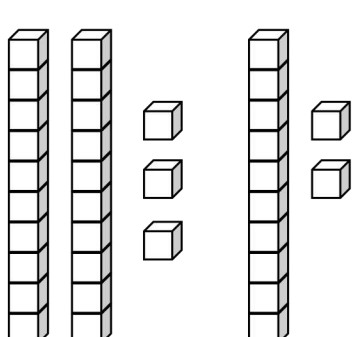
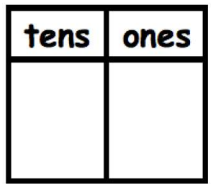
2.  

$20 + 4 = \underline{\quad}$

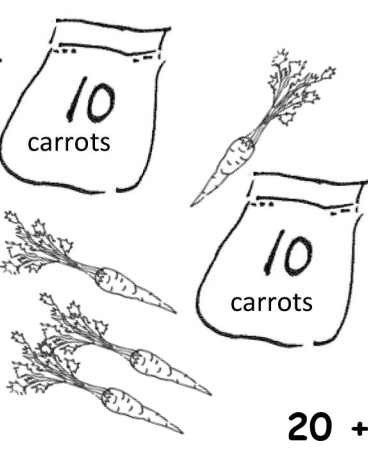
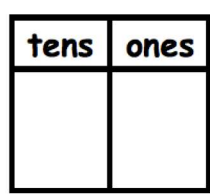
4 more than 20 is $\underline{\quad}$.

3.  

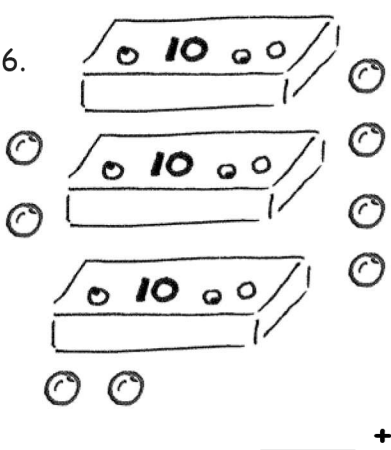
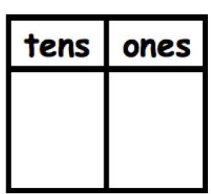
$7 + 20 = \underline{\quad}$

4.  

$\underline{\quad} + 30 = \underline{\quad}$

5.  


$20 + \underline{\quad} = \underline{\quad}$

6.  

$\underline{\quad} + \underline{\quad} = \underline{\quad}$

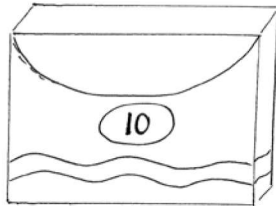
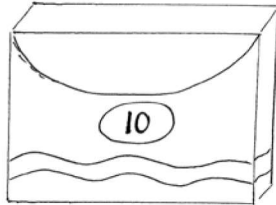
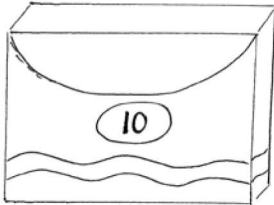
Match the pictures with the words.

7.





1 and 30 make _____.

8.



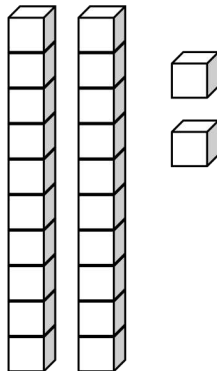
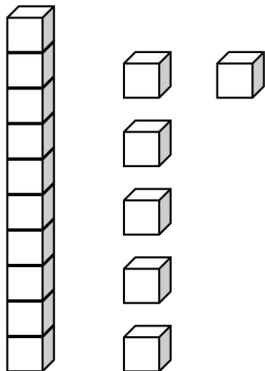
$8 + 30 =$ _____.

9.



2 more than 10 is _____.

10.



$20 + 4 =$ _____.

Answer Key

1. 20, 3, 23; 23; 23
2. 20, 4, 24; 24; 24
3. 2, 7; 27
4. 3, 5; 5, 35
5. 2, 4; 4, 24
6. 3, 8; 30, 8, 38
7. 2 more than 10 is 12.
8. 1 and 30 make 31.
9. $20 + 4 = 24$
10. $8 + 30 = 38$