

Name _____

Date _____

Draw quick tens and ones to show the number. Then, draw 1 more or 10 more.

1.

1 more than 38 is _____.

2.

10 more than 38 is _____.

3.

1 more than 35 is _____.

4.

10 more than 35 is _____.

Draw quick tens and ones to show the number. Cross off (x) to show 1 less or 10 less.

5.

10 less than 23 is _____.

6.

1 less than 23 is _____.

7.

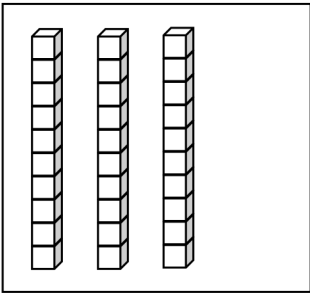
10 less than 31 is _____.

8.

1 less than 31 is _____.

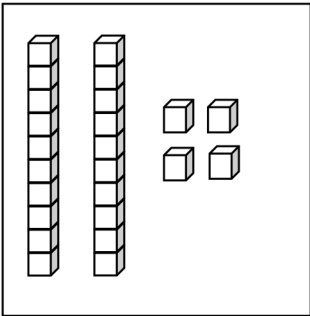
Match the words to the picture that shows the right amount.

9.



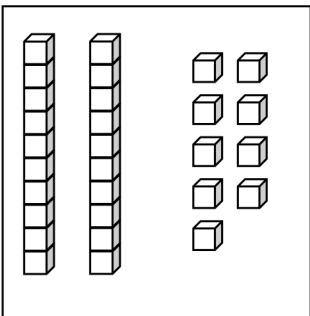
● 1 less than 30.

10.



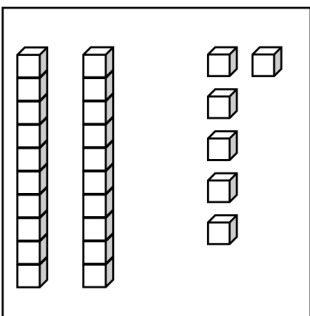
● 1 more than 23 is 24.

11.



● 10 less than 36.

12.



● 10 more than 20.

Answer Key

1. 3 quick tens and 9 ones drawn; 39
2. 4 quick tens and 8 ones drawn; 48
3. 3 quick tens and 6 ones drawn; 36
4. 4 quick tens and 5 ones drawn; 45
5. 23 drawn, 10 crossed off; 13
6. 23 drawn, 1 crossed off; 22
7. 31 drawn, 10 crossed off; 21
8. 31 drawn, 1 crossed off; 30
9. 10 more than 20
10. 1 more than 23 is 24
11. 1 less than 30
12. 10 less than 36