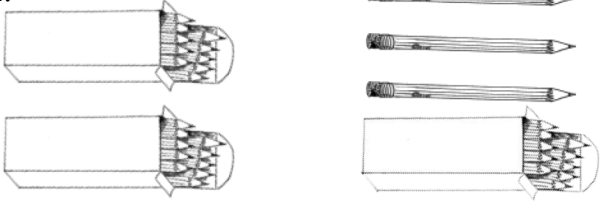


Name _____

Date _____


Fill in the missing numbers to match the picture. Complete the number bond to match.

1.



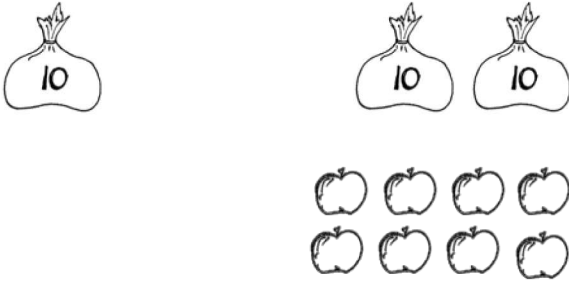
$$20 + 13 = \underline{\quad}$$

2.



$$17 + \underline{\quad} = \underline{\quad}$$

3.



$$\underline{\quad} + \underline{\quad} = \underline{\quad}$$

4.



$$\underline{\quad} + \underline{\quad} = \underline{\quad}$$

Draw using quick tens and ones. Complete the number bond and the number sentence.


<p>5.</p> <table border="1" style="display: inline-table; margin-right: 20px;"> <tr><th>tens</th><th>ones</th></tr> <tr><td>1</td><td>7</td></tr> </table> + <table border="1" style="display: inline-table; margin-left: 20px;"> <tr><th>tens</th><th>ones</th></tr> <tr><td>1</td><td>0</td></tr> </table> <div style="text-align: center; margin-top: 20px;"> \wedge _____ + _____ = _____ </div>	tens	ones	1	7	tens	ones	1	0	<p>6.</p> <table border="1" style="display: inline-table; margin-right: 20px;"> <tr><th>tens</th><th>ones</th></tr> <tr><td>1</td><td>9</td></tr> </table> + <table border="1" style="display: inline-table; margin-left: 20px;"> <tr><th>tens</th><th>ones</th></tr> <tr><td> </td><td> </td></tr> </table> <div style="text-align: center; margin-top: 20px;"> \wedge _____ + _____ = <u>39</u> </div>	tens	ones	1	9	tens	ones		
tens	ones																
1	7																
tens	ones																
1	0																
tens	ones																
1	9																
tens	ones																


Use arrow notation to solve.

<p>7.</p> <div style="display: flex; align-items: center; justify-content: center;"> 19 <table border="1" style="margin-right: 10px;"> <tr><td>+10</td></tr> </table> → </div>	+10	<p>8.</p> <div style="display: flex; align-items: center; justify-content: center;"> 9 <table border="1" style="margin-right: 10px;"> <tr><td>+30</td></tr> </table> → </div>	+30
+10			
+30			
<p>9.</p> <div style="display: flex; align-items: center; justify-content: center;"> <table border="1" style="margin-right: 10px;"> <tr><td>+10</td></tr> </table> → 38 </div>	+10	<p>10.</p> <div style="display: flex; align-items: center; justify-content: center;"> <table border="1" style="margin-right: 10px;"> <tr><td>+20</td></tr> </table> → 31 </div>	+20
+10			
+20			

Use the dimes and pennies to complete the place value charts.

11.





<table border="1" style="width: 100%; height: 80px;"> <tr><th>tens</th><th>ones</th></tr> <tr><td> </td><td> </td></tr> </table>	tens	ones			+	<table border="1" style="width: 100%; height: 80px;"> <tr><th>tens</th><th>ones</th></tr> <tr><td> </td><td> </td></tr> </table>	tens	ones			=	<table border="1" style="width: 100%; height: 80px;"> <tr><th>tens</th><th>ones</th></tr> <tr><td> </td><td> </td></tr> </table>	tens	ones		
tens	ones															
tens	ones															
tens	ones															

Answer Key

1. 33; 13, 20, 33
2. 20, 37; 17, 20, 37
3. 10, 28, 38; 10, 28, 38
4. 30, 19, 49; 19, 30, 49
5. Quick tens/ones drawn; 10, 17, 27; 10, 17, 27
6. Quick tens/ones drawn; 19, 20, 39; 19, 20
7. 29
8. 39
9. 28
10. 11
11. 1, 8; 2, 0; 3, 8