

Name \_\_\_\_\_

Date \_\_\_\_\_

Draw quick tens and ones to help you solve the addition problems.

1.

$17 + 2 = \underline{\quad}$

2.

$17 + 3 = \underline{\quad}$

3.

$14 + 3 = \underline{\quad}$

4.

$24 + 10 = \underline{\quad}$

Make a number bond or use the arrow way to solve the addition problems.

5.

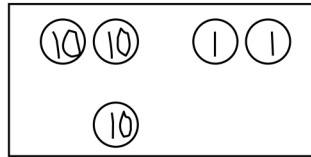
$6 + 24 = \underline{\quad}$

6.

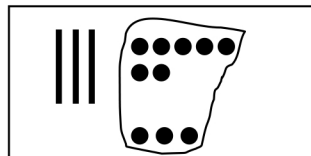
$14 + 20 = \underline{\quad}$

7. Solve each addition sentence and match.

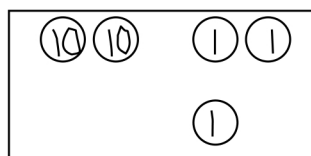
a.  
 $22 + 1 = \underline{\hspace{2cm}}$



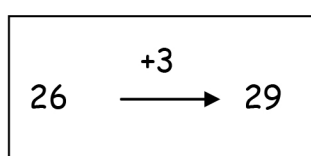
b.  
 $13 + 6 = \underline{\hspace{2cm}}$



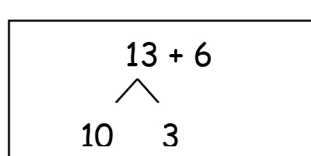
c.  
 $3 + 26 = \underline{\hspace{2cm}}$



d.  
 $37 + 3 = \underline{\hspace{2cm}}$



e.  
 $22 + 10 = \underline{\hspace{2cm}}$



## Answer Key

1. Quick ten drawing; 19
2. Quick ten drawing; 20
3. Quick ten drawing; 17
4. Quick ten drawing; 34
5. Written notation; 30
6. Written notation; 34
7.
  - a. 23; 2 dimes and 3 pennies
  - b. 19;  $13 + 6$
  - c. 29;  $26 \xrightarrow{+3} 29$
  - d. 40; quick ten drawing
  - e. 32; 3 dimes and 2 pennies