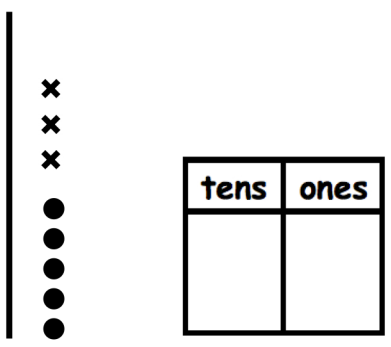
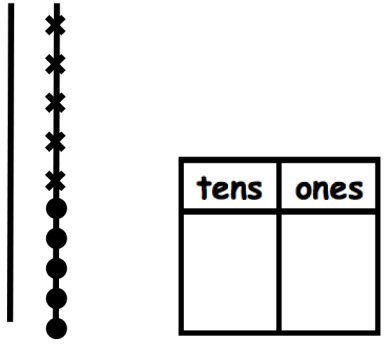
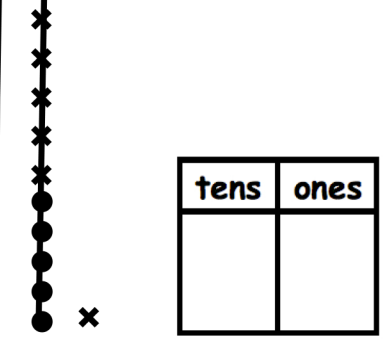
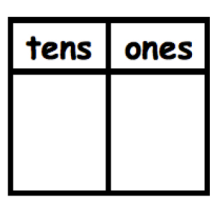
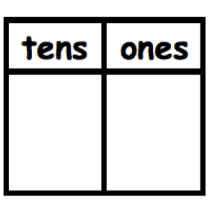
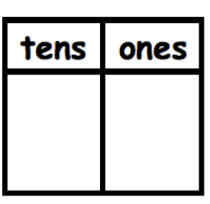
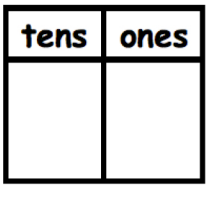
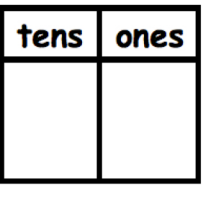
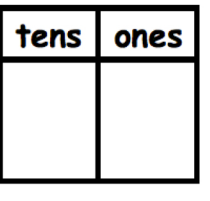


Name _____

Date _____

Use the pictures or draw quick tens and ones. Complete the number sentence and place value chart.

| | | |
|--|--|--|
| <p>1. $15 + 3 = \underline{\hspace{2cm}}$</p>  | <p>2. $15 + 5 = \underline{\hspace{2cm}}$</p>  | <p>3. $15 + 6 = \underline{\hspace{2cm}}$</p>  |
| <p>4. $28 + 2 = \underline{\hspace{2cm}}$</p>  | <p>5. $28 + 4 = \underline{\hspace{2cm}}$</p>  | <p>6. $28 + 7 = \underline{\hspace{2cm}}$</p>  |
| <p>7. $17 + 3 = \underline{\hspace{2cm}}$</p>  | <p>8. $17 + 7 = \underline{\hspace{2cm}}$</p>  | <p>9. $27 + 7 = \underline{\hspace{2cm}}$</p>  |

Make a number bond to solve. Show your thinking with number sentences or the arrow way. Complete the place value chart.

10.

$13 + 6 = \underline{\quad}$

| tens | ones |
|------|------|
| | |

11.

$13 + 7 = \underline{\quad}$

| tens | ones |
|------|------|
| | |

12.

$25 + 5 = \underline{\quad}$

| tens | ones |
|------|------|
| | |

13.

$25 + 8 = \underline{\quad}$

| tens | ones |
|------|------|
| | |

14.

$24 + 8 = \underline{\quad}$

| tens | ones |
|------|------|
| | |

15.

$23 + 9 = \underline{\quad}$

| tens | ones |
|------|------|
| | |

Answer Key

1. 18; 1, 8
2. 20; 2, 0
3. 21; 2, 1
4. 30; 3, 0; quick ten drawing
5. 32; 3, 2; quick ten drawing
6. 35; 3, 5; quick ten drawing
7. 20; 2, 0; quick ten drawing
8. 24; 2, 4; quick ten drawing
9. 34; 3, 4; quick ten drawing
10. 10, 3; 19; 1, 9; work shown may vary
11. 10, 3; 20; 2, 0; work shown may vary
12. 20, 5; 30; 3, 0; work shown may vary
13. 20, 5; 33; 3, 3; work shown may vary
14. 20, 4; 32; 3, 2; work shown may vary
15. 20, 3; 32; 3, 2; work shown may vary