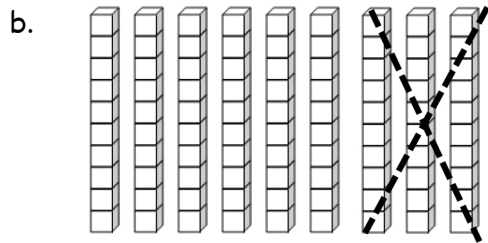
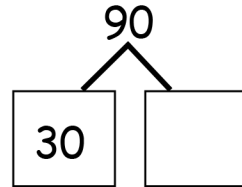
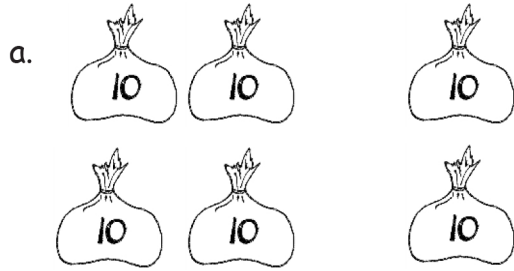


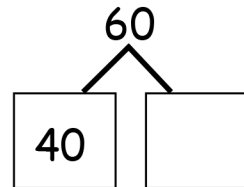
Name _____

Date _____

1. Complete the number bond or number sentence, and find the matching picture.



$$\underline{\quad\quad} - 40 = 60$$



$$80 - \underline{\quad\quad} = 60$$

2. Fill in the missing numbers.

a. $70 + \underline{\quad} = 90$

b. $\underline{\quad} + 30 = 80$

c. $100 - \underline{\quad} = 20$

d. $30 + 60 = \underline{\quad}$

e. $70 - \underline{\quad} = 20$

f. $20 + \underline{\quad} = 60$

g. $\underline{\quad} - 20 = 60$

h. $90 - \underline{\quad} = 20$

i. $50 + \underline{\quad} = 100$

3. Count the dimes to add or subtract. Write a number sentence to match the dimes.

a.



$40 + 20 =$

b.



c.



d.



Answer Key

1.
 - a. Line drawn to number bond 60, 40, ___; 20
 - b. Line drawn to number bond 90, 30, ___; 60
 - c. Line drawn to number sentence $80 - \underline{\quad} = 60$; 20
 - d. Line drawn to number sentence $\underline{\quad} - 40 = 60$; 100
2.
 - a. 60
 - b. $70 - 20 = 50$
 - c. $70 + 30 = 100$
 - d. $60 - 40 = 20$
3.
 - a. 20
 - b. 50
 - c. 80
 - d. 90
 - e. 50
 - f. 40
 - g. 80
 - h. 70
 - i. 50