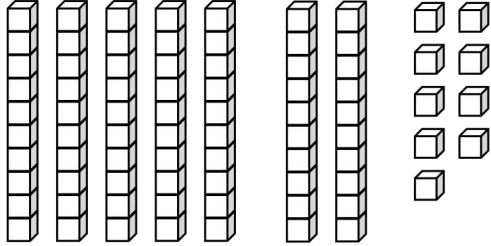
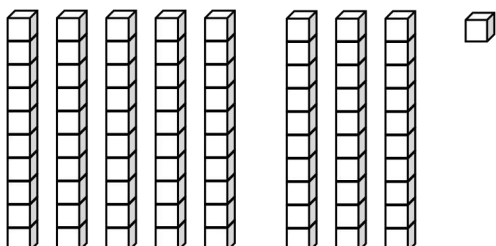
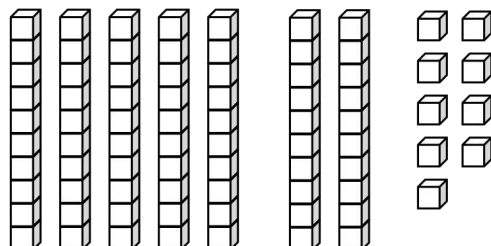
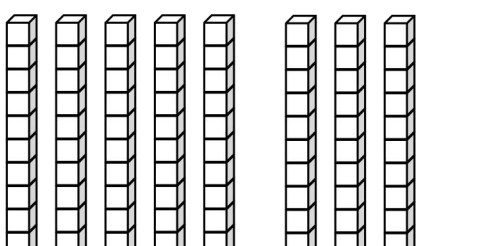


Name _____

Date _____

1. Solve. You may draw or cross off (x) to show your work.

<p>a.</p>  <p style="text-align: center;">10 more than 79 is _____.</p>	<p>b.</p>  <p style="text-align: center;">10 less than 81 is _____.</p>
<p>c.</p>  <p style="text-align: center;">1 more than 79 is _____.</p>	<p>d.</p>  <p style="text-align: center;">1 less than 80 is _____.</p>

2. Find the mystery numbers. You may make a drawing to help solve, if needed.

a. 10 more than 75 is _____.

tens	ones
7	5

→ + 10 →

tens	ones

b. 1 more than 75 is _____.

tens	ones

→

tens	ones

c. 10 less than 88 is _____.

tens	ones

tens	ones

d. 1 less than 88 is _____.

tens	ones

tens	ones

3. Write the number that is **1 more**.

a. 40, _____

b. 50, _____

c. 65, _____

d. 69, _____

e. 99, _____

4. Write the number that is **10 more**.

a. 60, _____

b. 70, _____

c. 77, _____

d. 89, _____

e. 90, _____

5. Write the number that is **1 less**.

a. 53, _____

b. 73, _____

c. 71, _____

d. 80, _____

e. 100, _____

6. Write the number that is **10 less**.

a. 50, _____

b. 60, _____

c. 84, _____

d. 91, _____

e. 100, _____

7.

a. 50, 51, 52, _____

c. 62, 61, _____, 59

e. 60, 70, 80, _____

g. 57, 67, _____, 87

i. _____, 99, 98, 97

b. 79, 78, 77, _____

d. 83, _____, 85, 86

f. 100, 90, 80, _____

h. 89, 79, _____, 59

j. _____, 84, _____, 64

Answer Key

1.
 - a. 89; 1 ten stick drawn
 - b. 71; 1 ten stick crossed off
 - c. 80; 1 cube drawn
 - d. 79; 1 cube crossed off
2.
 - a. 85; 8, 5
 - b. 76; 7, 5, $\xrightarrow{+1}$, 7, 6
 - c. 78; 8, 8, $\xrightarrow{-10}$, 7, 8
 - d. 87; 8, 8, $\xrightarrow{-1}$, 8, 7
3.
 - a. 41
 - b. 51
 - c. 66
 - d. 70
 - e. 100
4.
 - a. 70
 - b. 80
 - c. 87
 - d. 99
 - e. 100
5.
 - a. 52
 - b. 72
 - c. 70
 - d. 79
 - e. 99
6.
 - a. 40
 - b. 50
 - c. 74
 - d. 81
 - e. 90
7.
 - a. 53
 - b. 76
 - c. 60
 - d. 84
 - e. 90
 - f. 70
 - g. 77
 - h. 69
 - i. 100
 - j. 94; 74