


Name _____

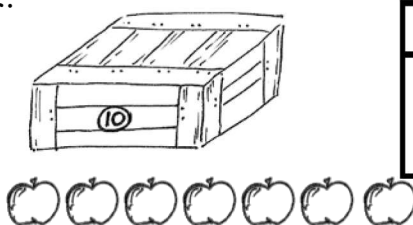
Date _____

Fill in the place value chart and the blanks.

1. 

tens	ones

30 = _____ tens

2. 

tens	ones

17 = _____ ten and _____ ones

3. 


dimes	pennies

_____ = 2 tens 2 ones

4. 

dimes	pennies

_____ = 3 tens 3 ones

5. 


dimes	pennies

_____ = _____ tens _____ ones

6. 


dimes	pennies

_____ = _____ tens _____ ones

7. 

tens	ones

_____ = _____ ten _____ ones

8. 

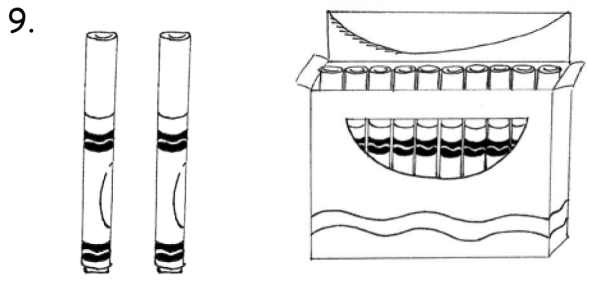
tens	ones

_____ tens _____ ones = _____

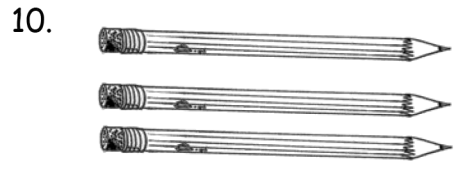


10 more than 25 is 35

Fill in the blank. Draw or cross off tens or ones as needed.



1 more than 12 is _____.



10 more than 3 is _____.



10 more than 22 is _____.



1 more than 22 is _____.



1 less than 39 is _____.



10 less than 39 is _____.



10 less than 33 is _____.



1 less than 33 is _____.

Answer Key

1. 3, 0; 3
2. 1, 7; 1, 7
3. 2, 2; 22
4. 3, 3; 33
5. 0, 8; 8, 0, 8
6. 3, 6; 36, 3, 6
7. 1, 6; 16, 1, 6
8. 2, 4; 2, 4, 24
9. 13; 1 more drawn
10. 13; 10 more drawn
11. 32; 1 more dime drawn
12. 23; 1 more penny drawn
13. 38; 1 penny crossed off
14. 29; 1 dime crossed off
15. 23; 1 dime crossed off
16. 32; 1 penny crossed off