
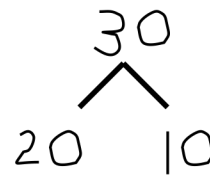





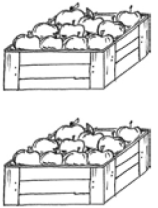
Name _____

Date _____



Draw a number bond, and complete the number sentences to match the pictures.

1.   

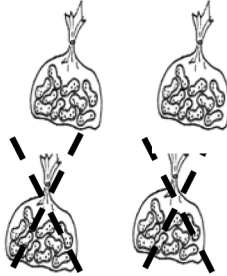

2 tens + 1 ten = 3 tens
 $20 + 10 = 30$

2.   

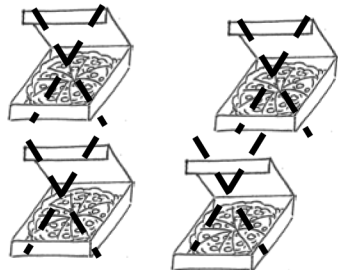

_____ tens = _____ ten + _____ tens

3.  



_____ tens - _____ ten = _____ tens

4.  

_____ tens - _____ tens = _____ tens

5.  

_____ tens - _____ tens = _____ tens

6.  

_____ tens + _____ tens = _____ tens

Draw quick tens and a number bond to help you solve the number sentences.

7.



$10 + 20 = \underline{\quad}$

8.



$30 - 10 = \underline{\quad}$

9.



$20 - 10 = \underline{\quad}$

10.



$30 + 10 = \underline{\quad}$

Add or subtract.

11. 2 tens + 1 ten =

12. 20 + 20 =

13. 40 - 10 =

14. = 20 + 10

15. 3 tens - 2 tens =

16. 20 - 10 =

17. 10 - 10 =

18. = 30 + 10

19. 40 - 30 =

Answer Key

1. Answer provided.
2. 10, 20, 30; 3, 1, 2; $30 = 10 + 20$
3. 10, 20, 30; 3, 1, 2; $30 - 10 = 20$
4. 20, 20, 40; 4, 2, 2; $40 - 20 = 20$
5. 0, 40, 40; 4, 4, 0; $40 - 40 = 0$
6. 20, 20, 40; 2, 2, 4; $20 + 20 = 40$
7. Quick tens drawn; 10, 20, 30; 30
8. Quick tens drawn; 10, 20, 30; 20
9. Quick tens drawn; 10, 10, 20; 10
10. Quick tens drawn; 10, 30, 40; 40
11. 3 tens
12. 40
13. 30
14. 30
15. 1 ten
16. 10
17. 0
18. 40
19. 10