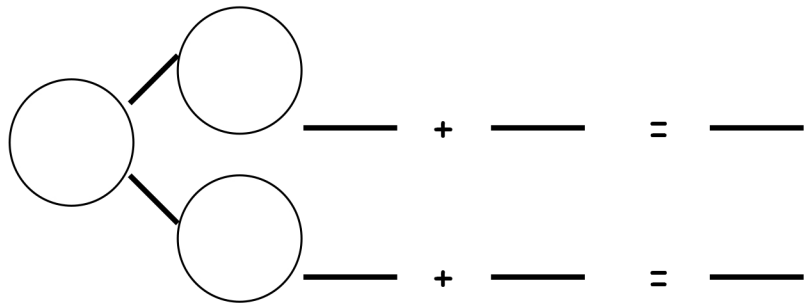




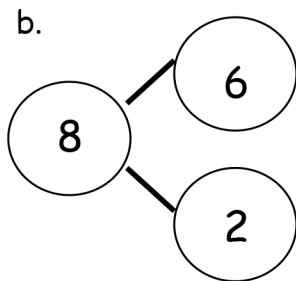

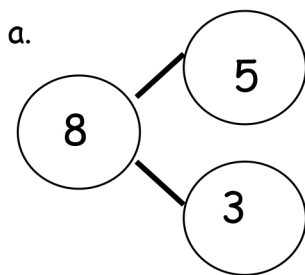
Name _____

Date _____

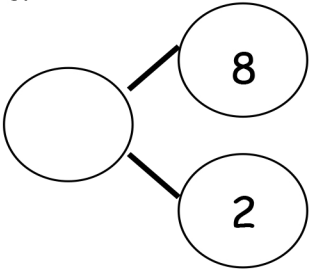
1. Use the picture to write a number bond. Then, write the matching number sentences.



2. Write the number sentences to match the number bonds.



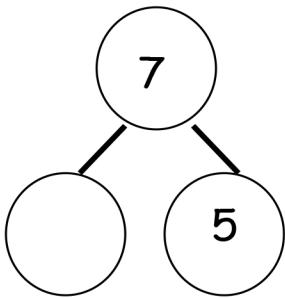
c.



$$\underline{\hspace{2cm}} + \underline{\hspace{2cm}} = \underline{\hspace{2cm}}$$

$$\underline{\hspace{2cm}} + \underline{\hspace{2cm}} = \underline{\hspace{2cm}}$$

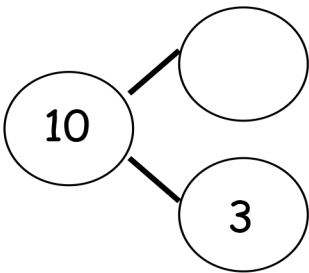
d.



$$\underline{\hspace{2cm}} + \underline{\hspace{2cm}} = \underline{\hspace{2cm}}$$

$$\underline{\hspace{2cm}} + \underline{\hspace{2cm}} = \underline{\hspace{2cm}}$$

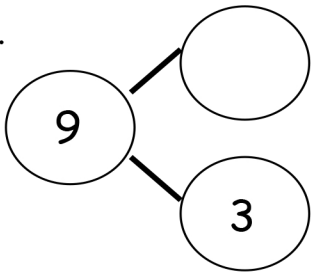
e.



$$\underline{\hspace{2cm}} = \underline{\hspace{2cm}} + \underline{\hspace{2cm}}$$

$$\underline{\hspace{2cm}} = \underline{\hspace{2cm}} + \underline{\hspace{2cm}}$$

f.



$$\underline{\hspace{2cm}} + \underline{\hspace{2cm}} = \underline{\hspace{2cm}}$$

$$\underline{\hspace{2cm}} + \underline{\hspace{2cm}} = \underline{\hspace{2cm}}$$

Answer Key

1. 7, 5, 2; 5, 2, 7; 2, 5, 7
2.
 - a. 5, 3, 8; 3, 5, 8
 - b. 8; 8, 6, 2; 8, 2, 6
 - c. 10; 8, 2, 10; 2, 8, 10
 - d. 2; 2, 5, 7; 5, 2, 7
 - e. 7; 10, 7, 3; 10, 3, 7
 - f. 6; 6, 3, 9; 3, 6, 9