

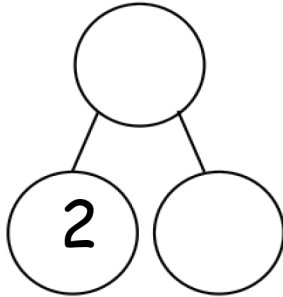
Name \_\_\_\_\_ Date \_\_\_\_\_

Color the larger part, and complete the number bond.

Write the number sentence, starting with the larger part.

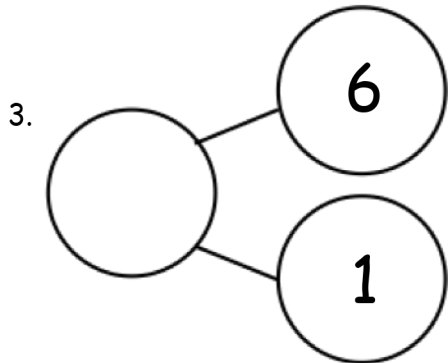
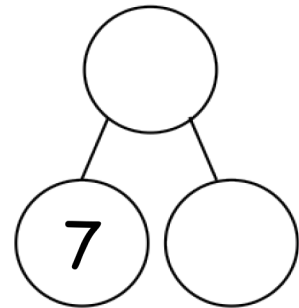


1.

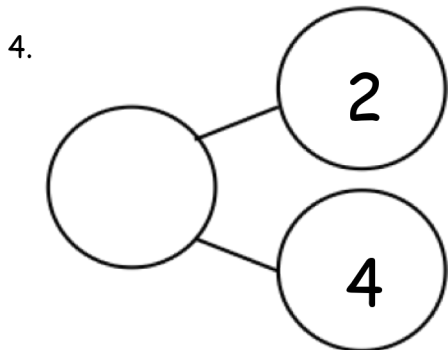


$$\square + \square = \square$$

2.  $\square = \square + \square$

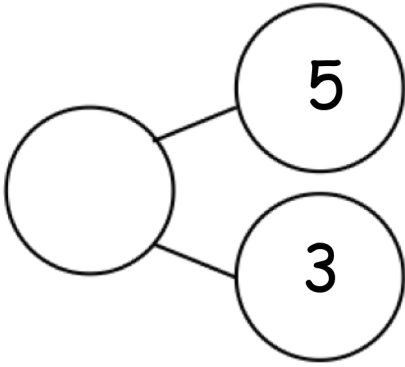


$$\underline{\hspace{2cm}} + \underline{\hspace{2cm}} = \underline{\hspace{2cm}}$$



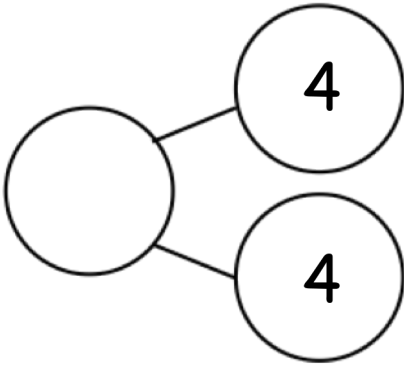
$$\underline{\hspace{2cm}} + \underline{\hspace{2cm}} = \underline{\hspace{2cm}}$$

5.



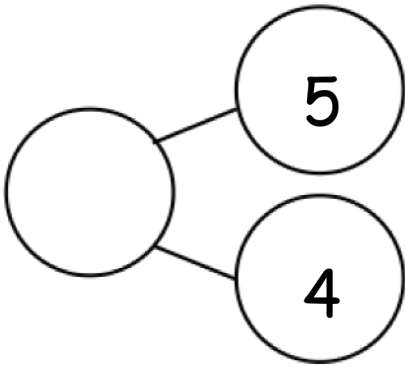
$$\underline{\quad\quad\quad} + \underline{\quad\quad\quad} = \underline{\quad\quad\quad}$$

6.



$$\underline{\quad\quad\quad} + \underline{\quad\quad\quad} = \underline{\quad\quad\quad}$$

7.



$$\underline{\quad\quad\quad} + \underline{\quad\quad\quad} = \underline{\quad\quad\quad}$$

## Answer Key

1. Group of 3 pencils colored; 5, 3; 2, 3, 5
2. Bag of 7 food items colored; 9, 2; 7, 2, 9
3. 6 colored; 7; 6, 1, 7
4. 4 colored; 6; 4, 2, 6
5. 5 colored; 8; 5, 3, 8
6. 4 colored; 8; 4, 4, 8
7. 5 colored; 9; 5, 4, 9