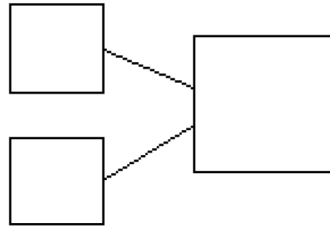


Name _____

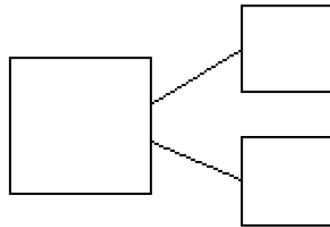
Date _____

Use the number sentences to draw a picture, and fill in the number bond to tell a math story.

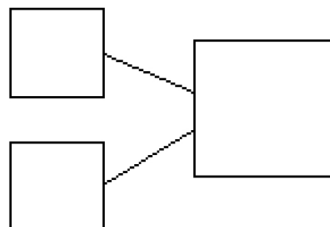

1. $5 + 2 = 7$



2. $3 + 6 = 9$



3. $7 + ? = 9$



Answer Key

1. Answers will vary; 5, 2, 7
2. Answers will vary; 9, 6, 3
3. Answers will vary; 7, 2, 9