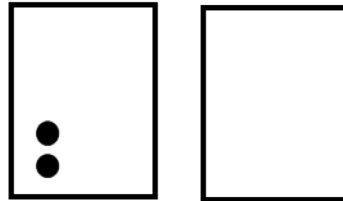


Name _____

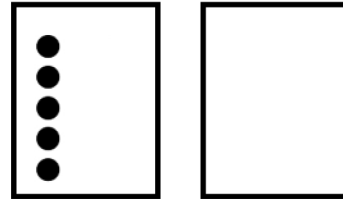
Date _____

1. Use the 5-group cards to count on to find the missing number in the number sentences.

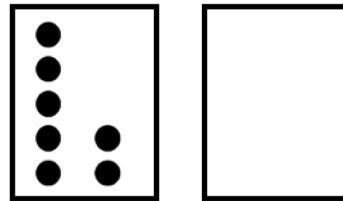
a. $\boxed{2} + \boxed{} = \boxed{7}$



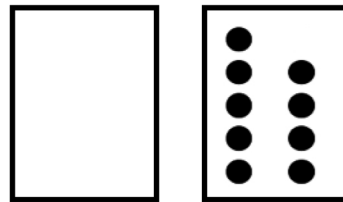
b. $\boxed{8} = \boxed{5} + \boxed{}$



c. $\boxed{9} = \boxed{7} + \boxed{}$



d. $\boxed{9} = \boxed{} + \boxed{9}$



2. Match the number sentence to the math story. Draw a picture or use your 5-group cards to solve.

a. Scott has 3 cookies. His mom gives him some more. Now, he has 8 cookies. How many cookies did his mom give him?

$$\boxed{6} + \boxed{?} = \boxed{9}$$

Scott's mom gave him _____ cookies.

$$\boxed{3} + \boxed{?} = \boxed{8}$$

b. Kim sees 6 birds in the tree. Some more birds fly in. Kim sees 9 birds in the tree. How many birds flew to the tree?

$$\boxed{4} + \boxed{?} = \boxed{8}$$

_____ birds flew to the tree.

Answer Key

1.
 - a. 5; 5 dots drawn on second card
 - b. 3; 3 dots drawn on second card
 - c. 2; 2 dots drawn on second card
 - d. 0; no dots drawn on first card
2.
 - a. 5; matched to $3 + ? = 8$
 - b. 3; matched to $6 + ? = 9$