


Name _____

Date _____

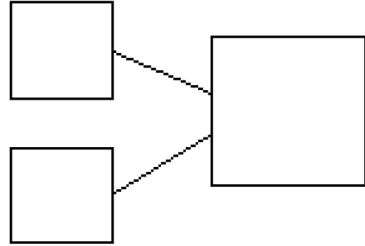
1. Use the picture to tell a math story.



Write a number sentence to tell the story.


$$\square + \square = \square$$

Write a number bond to match your story.



There are _____ sharks.

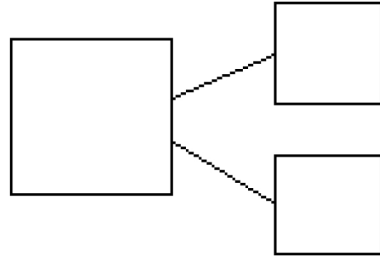
2. Use the picture to tell a math story.



Write a number sentence to tell the story.

$$\square = \square + \square$$

Write a number bond to match your story.



There are _____ students.

Draw a picture to match the story.

3. Jim has 4 big dogs and 3 small dogs. How many dogs does Jim have?



$$\square + \square = \square$$

Jim has _____ dogs.

4. Liv plays at the park. She plays with 3 girls and 6 boys. How many kids does she play with at the park?



$$\square = \square + \square$$

Liv plays with _____ kids.

Answer Key

1. Answers will vary; 8
2. Answers will vary; 7
3. Group of 4 and group of 3 objects drawn; 4, 3, 7; 7
4. Group of 3 and group of 6 objects drawn; 9, 3, 6; 9