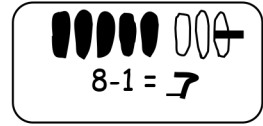


Name _____

Date _____

Show the subtraction. If you want, use a 5-group drawing for each problem.



1.

2.

$$9 - 1 = \underline{\quad}$$

$$9 - 0 = \underline{\quad}$$

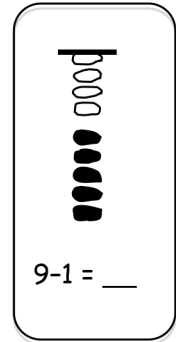
3.

4.

$$6 - \underline{\quad} = 6$$

$$6 = 7 - \underline{\quad}$$

Show the subtraction. If you want, use a 5-group drawing like the model for each problem.



5.

6.

$$9 - \underline{\quad} = 9$$

$$8 = 8 - \underline{\quad}$$

7.

8.

$$10 - \underline{\quad} = 9$$

$$7 - \underline{\quad} = 7$$

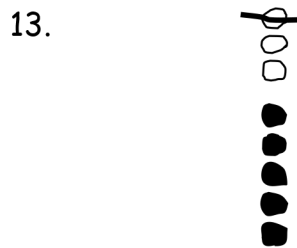
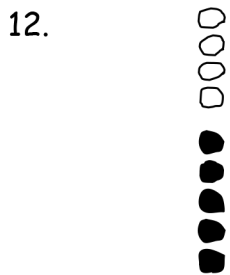
Write the subtraction number sentence to match the 5-group drawing.



_____ - _____ = _____

_____ - _____ = _____

_____ - _____ = _____



_____ - _____ = _____

_____ - _____ = _____

14. Fill in the missing number. Visualize your 5-groups to help you.

a. $7 - \underline{\quad} = 6$

b. $0 = 7 - \underline{\quad}$

c. $8 - \underline{\quad} = 7$

d. $6 - \underline{\quad} = 5$

e. $8 = 9 - \underline{\quad}$

f. $9 = 10 - \underline{\quad}$

g. $10 - \underline{\quad} = 10$

h. $9 - \underline{\quad} = 8$

Answer Key

1. 8; 5-group drawing: 9 circles with 1 circle crossed off
2. 9; 5-group drawing: 9 circles
3. 0; 5-group drawing: 6 circles
4. 1; 5-group drawing: 7 circles with 1 circle crossed off
5. 0; vertical 5-group drawing: 9 circles
6. 0; vertical 5-group drawing: 8 circles
7. 1; vertical 5-group drawing: 10 circles with 1 circle crossed off
8. 0; vertical 5-group drawing: 7 circles
9. 6, 1, 5
10. 7, 0, 7
11. 9, 1, 8
12. 9, 0, 9
13. 8, 1, 7
14. a. 1
b. 7
c. 1
d. 1
e. 1
f. 1
g. 0
h. 1