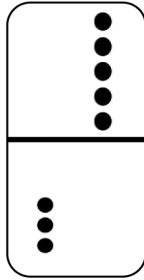
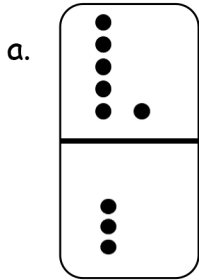
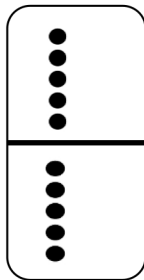
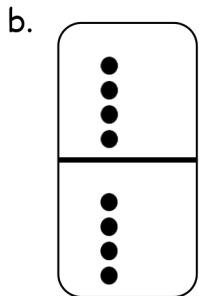


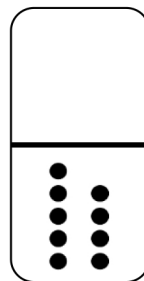
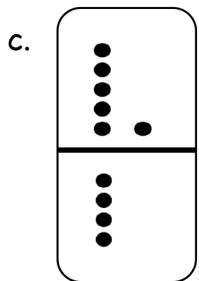
Name _____

Date _____





1. Match the equal dominoes. Then, write true number sentences.







2. Find the expressions that are equal. Use the equal expressions to write true number sentences.



a. _____

b. _____

Answer Key

1.
 - a. Matched to 0 and 9; $6 + 3 = 0 + 9$
 - b. Matched to 5 and 3; $4 + 4 = 5 + 3$
 - c. Matched to 5 and 5; $6 + 4 = 5 + 5$
2.
 - a. $5 + 2 = 4 + 3$
 - b. $8 + 2 = 7 + 3$