
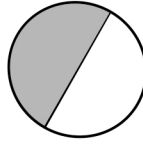


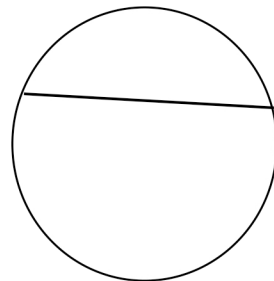
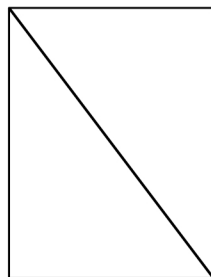
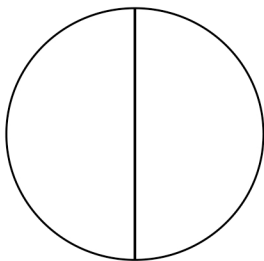

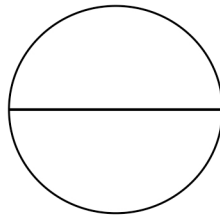



Name _____

Date _____





1. Circle the shapes that have 2 equal shares with 1 share shaded.



2. Shade 1 half of the shapes that are split into 2 equal shares. One has been done for you.



3. Partition the shapes to show halves. Shade one half of each.



Answer Key

1. First, third, and fourth shapes circled
2. Shapes (e), (f), (g), and (h) shaded
3. Partitions and shadings will vary.