

Name _____

Date _____

1. How much time has passed?



a. 2:00 p.m. → 8:00 p.m. _____



b. 7:30 a.m. → 12:00 p.m. (noon) _____



c. 10:00 a.m. → 4:30 p.m. _____

d. 1:30 p.m. → 8:30 p.m. _____

e. 9:30 a.m. → 2:00 p.m. _____

f.  →  _____
p.m. p.m.

g.  →  _____
a.m. a.m.

h.  →  _____
a.m. p.m.

2. Solve.

- a. Kylie started basketball practice at 2:30 p.m. and finished at 6:00 p.m. How long was Kylie at basketball practice?
- b. Jamal spent 4 and a half hours at his family picnic. It started at 1:30 p.m. What time did Jamal leave?
- c. Christopher took 2 hours doing his homework. He finished at 5:30 p.m. What time did he start his homework?
- d. Henry slept from 8 p.m. to 6:30 a.m. How many hours did Henry sleep?

Answer Key

1.
 - a. 6 hours
 - b. 4 and a half hours, or 4 hours and 30 minutes
 - c. 6 and a half hours, or 6 hours and 30 minutes
 - d. 7 hours
 - e. 4 and a half hours, or 4 hours and 30 minutes
 - f. 5 hours
 - g. 3 and a half hours, or 3 hours and 30 minutes
 - h. 2 and a half hours, or 2 hours and 30 minutes
2.
 - a. 3 and a half hours, or 3 hours and 30 minutes
 - b. 6:00 p.m.
 - c. 3:30 p.m.
 - d. 10 and a half hours, or 10 hours and 30 minutes