



Name _____

Date _____

1. Choose whether the activity below would happen in the a.m. or the p.m.

a. Eating breakfast	a.m. / p.m.	b. Doing homework	a.m. / p.m.
c. Setting the table for dinner	a.m. / p.m.	d. Waking up in the morning	a.m. / p.m.
e. After-school dance class	a.m. / p.m.	f. Eating lunch	a.m. / p.m.
g. Going to bed	a.m. / p.m.	h. Heating up dinner	a.m. / p.m.

2. Write the time displayed on the clock. Then choose whether the activity below would happen in the a.m. or the p.m.

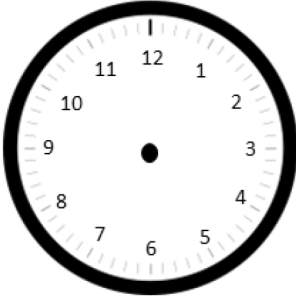
<p>a. Brushing your teeth before school</p>  <p>_____ : _____ a.m. / p.m.</p>	<p>b. Eating dessert after dinner</p>  <p>_____ : _____ a.m. / p.m.</p>
--	---

3. Draw the hands on the analog clock to match the time on the digital clock. Then, circle a.m. or p.m. based on the description given.

a. Brushing your teeth before bedtime

8:15

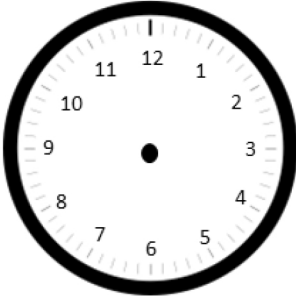
a.m. or p.m.



b. Recess after lunch

12:30

a.m. or p.m.




4. Write what you might be doing if it were a.m. or p.m.

a. a.m. _____

b. p.m. _____

c. a.m. _____

d. p.m. _____



Answer Key

1.
 - a. a.m.
 - b. p.m.
 - c. p.m.
 - d. a.m.
 - e. p.m.
 - f. a.m. or p.m.
 - g. p.m.
 - h. p.m.
2.
 - a. 7 a.m.
 - b. 8:25 p.m.
3.
 - a. Hands drawn to show 8:15; p.m. circled
 - b. Hands drawn to show 12:30; p.m. is circled
4. Answers will vary.