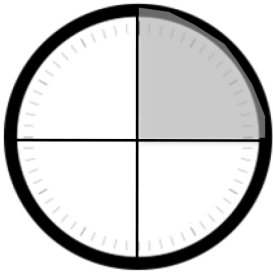


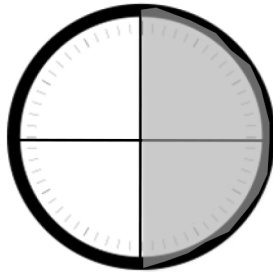
Name \_\_\_\_\_

Date \_\_\_\_\_

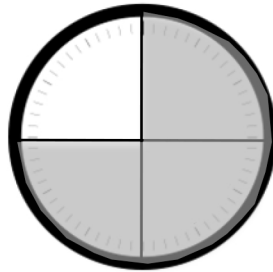
1. Tell what fraction of each clock is shaded in the space below using the words *quarter*, *quarters*, *half*, or *halves*.




\_\_\_\_\_



\_\_\_\_\_



\_\_\_\_\_



\_\_\_\_\_

2. Write the time shown on each clock.

a.



\_\_\_\_\_

b.



\_\_\_\_\_

c.



d.



3. Match each time to the correct clock by drawing a line.

- Quarter to 5



- Half past 5



- 5:15

- Quarter after 5




- 4:45

4. Draw the minute hand on the clock to show the correct time.



3:30



11:45



6:15

## Answer Key

1. 1 quarter; 2 quarters or 1 half; 3 quarters; 4 quarters or 2 halves
2.
  - a. 6:45
  - b. 12:30
  - c. 10:45
  - d. 9:15
3. Line drawn from time to corresponding clock
4. Minute hand drawn pointing to 6 (3:30), 9 (11:45), and 3 (6:15), respectively