

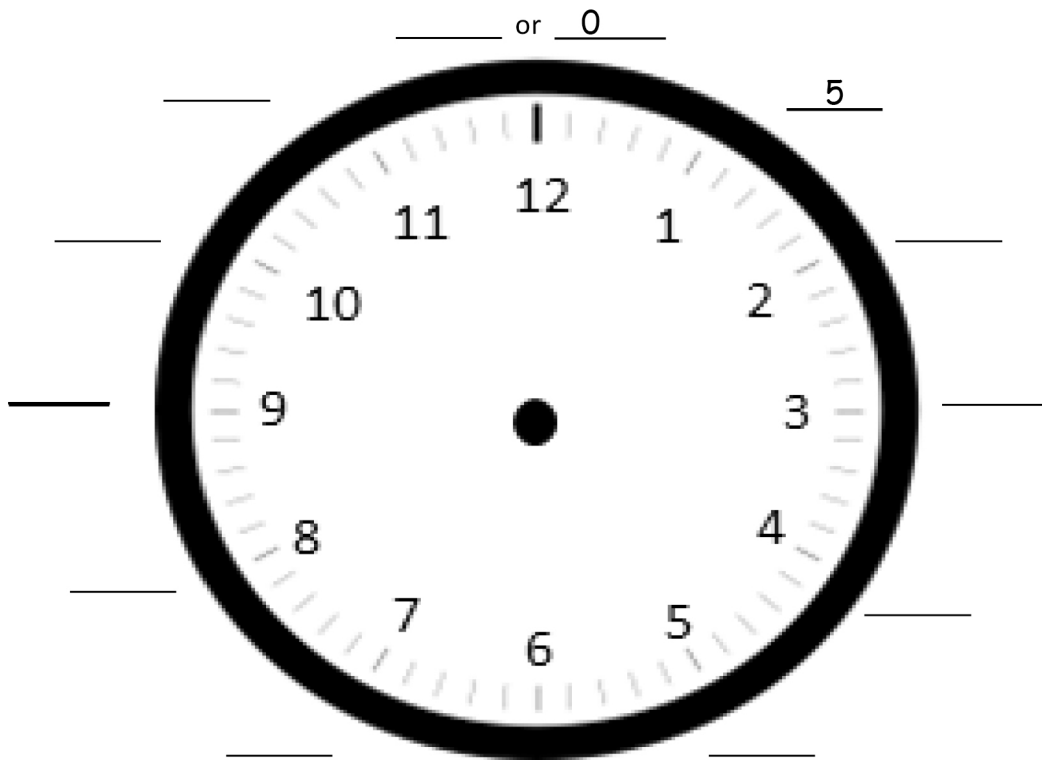
Name _____

Date _____

1. Fill in the missing numbers.

0, 5, 10, _____, _____, _____, _____, 35, _____, _____, _____, _____, _____
_____, _____, _____, 45, 40, _____, _____, _____, 20, 15, _____, _____, _____

2. Fill in the missing minutes on the face of the clock.



3. Draw the minute hands on the clocks to match to correct time.



3:25



7:15



9:55


4. Draw the hour hands on the clocks to match the correct time.



12:30

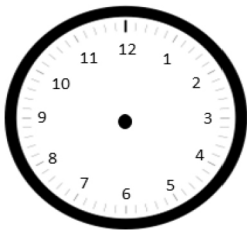


10:10

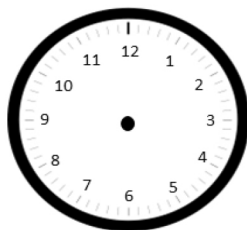


3:45

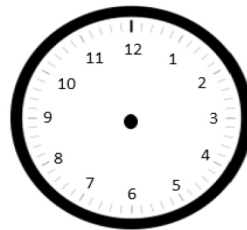
5. Draw the hour and minute hands on the clocks to match to correct time.



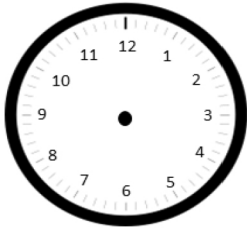
6:55



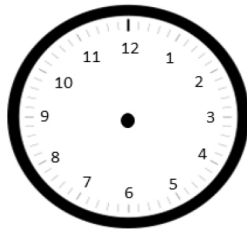
1:50



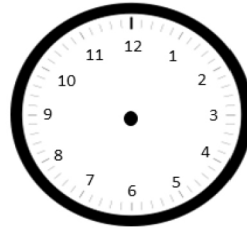
8:25



4:40




7:45



2:05

6. What time is it?





Answer Key

1. 15, 20, 25, 30; 40, 45, 50, 55, 60
60, 55, 50; 35, 30, 25; 10, 5, 0
2. First two answers provided, 10, 15, 20, 25, 30, 35, 40, 45, 50, 55, 60
3. Minute hand respectively drawn to show 3:25, 7:15, and 9:55
4. Hour hand respectively drawn to show 12:30, 10:10, and 3:45
5. Hands respectively drawn to show 6:55, 1:50, 8:25, 4:40, 7:45, and 2:05
6. 1:35; 10:05