

Name _____

Date _____

1. Solve using mental math.

a. $6 - 5 =$ _____ $26 - 5 =$ _____ $26 - 6 =$ _____ $26 - 7 =$ _____

b. $8 - 7 =$ _____ $58 - 7 =$ _____ $58 - 8 =$ _____ $58 - 9 =$ _____

2. Solve using your place value chart and place value disks. Unbundle a ten, if needed. Think about which problems you can solve mentally, too!

a. $36 - 5 =$ _____ $36 - 7 =$ _____

b. $37 - 6 =$ _____ $37 - 8 =$ _____

c. $40 - 5 =$ _____ $41 - 5 =$ _____

d. $58 - 32 =$ _____ $58 - 29 =$ _____

e. $60 - 26 =$ _____ $62 - 26 =$ _____

f. $70 - 41 =$ _____ $80 - 41 =$ _____

3. Solve, and explain your strategy.


a.

$$41 - 27 = \underline{\quad}$$


b.

$$67 - 28 = \underline{\quad}$$

4. The number of marbles in each jar is marked on the front. Miss Clark took 37 marbles out of each jar. How many marbles are left in each jar? Complete the number sentence to find out.




a. $\underline{\quad} - \underline{\quad} = \underline{\quad}$



b. $\underline{\quad} - \underline{\quad} = \underline{\quad}$



c. $\underline{\quad} - \underline{\quad} = \underline{\quad}$



d. $\underline{\quad} - \underline{\quad} = \underline{\quad}$

Answer Key

1.
 - a. 1, 21, 20, 19
 - b. 1, 51, 50, 49
2.
 - a. 31, 29
 - b. 31, 29
 - c. 35, 36
 - d. 26, 29
 - e. 34, 36
 - f. 29, 39
3.
 - a. 14; explanations will vary.
 - b. 39; explanations will vary.
4.
 - a. $45 - 37 = 8$
 - b. $52 - 37 = 15$
 - c. $48 - 37 = 11$
 - d. $55 - 37 = 18$