
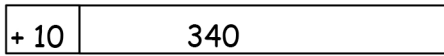


Name \_\_\_\_\_



Date \_\_\_\_\_

1. Draw and label a tape diagram to show how to simplify the problem. Write the new number sentence, and then subtract.

a.  $340 - 190 = \underline{350 - 200} = \underline{\hspace{2cm}}$



b.  $420 - 190 = \underline{\hspace{2cm}} = \underline{\hspace{2cm}}$



c.  $500 - 280 = \underline{\hspace{2cm}} = \underline{\hspace{2cm}}$

d.  $650 - 280 = \underline{\hspace{2cm}} = \underline{\hspace{2cm}}$

e.  $740 - 270 = \underline{\hspace{2cm}} = \underline{\hspace{2cm}}$

2. Draw and label a tape diagram to show how to simplify the problem. Write a new number sentence, and then subtract. Check your work using addition.

a.  $236 - 99 = \underline{237 - 100} = \underline{\hspace{2cm}}$

<table border="1"><tr><td style="width: 10%; text-align: center;">+ 1</td><td style="width: 90%; text-align: center;">236</td></tr><tr><td style="width: 10%; text-align: center;">+ 1</td><td style="width: 90%; text-align: center;">99</td></tr></table>	+ 1	236	+ 1	99	Check:
+ 1	236				
+ 1	99				

b.  $372 - 199 = \underline{\hspace{2cm}} = \underline{\hspace{2cm}}$

	Check:
--	--------

c.  $442 - 298 = \underline{\hspace{2cm}} = \underline{\hspace{2cm}}$

	Check:
--	--------

d.  $718 - 390 = \underline{\hspace{2cm}} = \underline{\hspace{2cm}}$

	Check:
--	--------

## Answer Key

1. Tape diagram drawn and labeled

a. Answer provided; 150

b.  $430 - 200 = 230$

c.  $520 - 300 = 220$

d.  $670 - 300 = 370$

e.  $770 - 300 = 470$

2. Tape diagram drawn and labeled

a. Answer provided; 137;  $137 + 100 = 237$

b.  $373 - 200 = 173$ ;  $173 + 200 = 373$

c.  $444 - 300 = 144$ ;  $144 + 300 = 444$

d.  $728 - 400 = 328$ ;  $328 + 400 = 728$