

Name _____


Date _____

1. Solve vertically. Draw and bundle place value disks on the place value chart.


a. $26 + 35 =$ _____




b. $28 + 14 =$ _____




c. $35 + 27 =$ _____




d. $23 + 46 =$ _____




e. $32 + 59 =$ _____



2. Twenty-eight second-grade students went on a field trip to the zoo. The other 24 second-grade students stayed at school. How many second grade students are there?



3. Alice cut a 27 cm piece of ribbon and had 39 cm of ribbon left over. How much ribbon did Alice have at first?



Answer Key

1.
 - a. 61; solved vertically; disks drawn
 - b. 42; solved vertically; disks drawn
 - c. 62; solved vertically; disks drawn
 - d. 69; solved vertically; disks drawn
 - e. 91; solved vertically; disks drawn
2. 52
3. 66 cm