


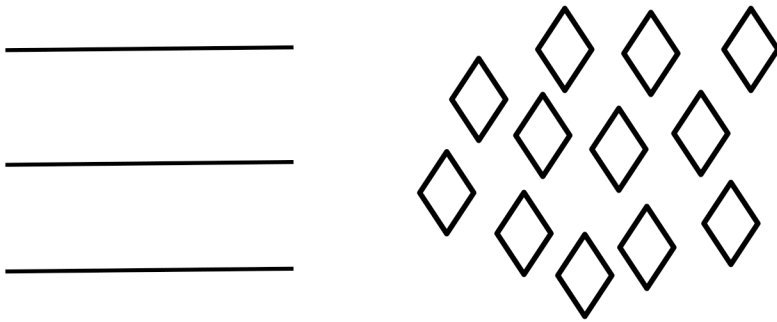
Name _____

Date _____

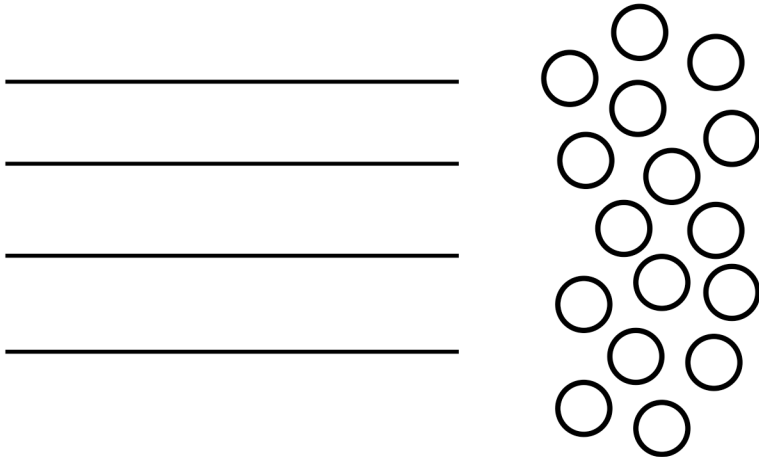
1. Circle groups of five. Then, draw the clouds into two equal rows.



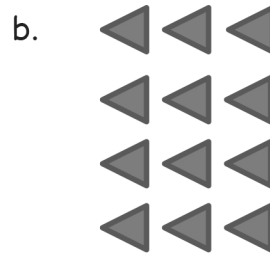

2. Circle groups of four. Redraw the groups of four as rows and then as columns.



3. Circle groups of four. Redraw the groups of four as rows and then as columns.



4. Count the objects in the arrays from left to right by rows and by columns. As you count, circle the rows and then the columns.



5. Redraw the smiley faces and triangles in Problem 4 as columns of three.

6. Draw an array with 20 triangles.

7. Show a different array with 20 triangles.

Answer Key

1. 2 groups of 5 clouds circled; 2 rows of 5 clouds drawn
2. 3 groups of 4 diamonds circled; 3 rows and 3 columns of 4 diamonds each drawn.
3. 4 groups of 4 circles circled; 4 rows and columns of 4 circles each drawn.
4.
 - a. 5 rows and 3 columns circled.
 - b. 4 rows and 3 columns circled.
5. 5 columns of 3 rows of smiley faces drawn; 4 columns of 3 rows of triangles drawn.
6. Answers will vary.
7. Answers will vary.