

Name \_\_\_\_\_

Date \_\_\_\_\_

1. Match each object with its approximate weight.




100 grams



10 grams



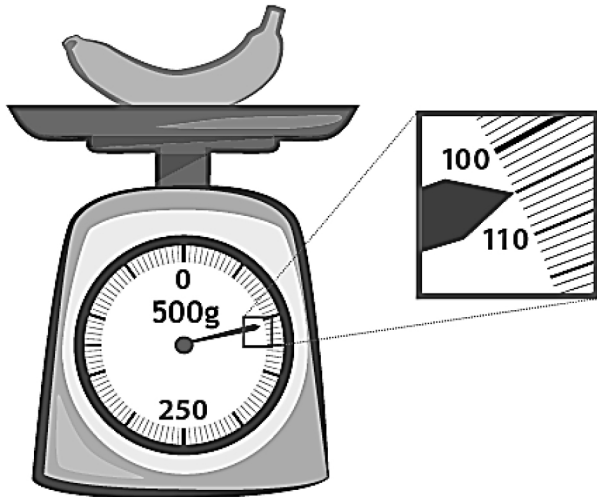
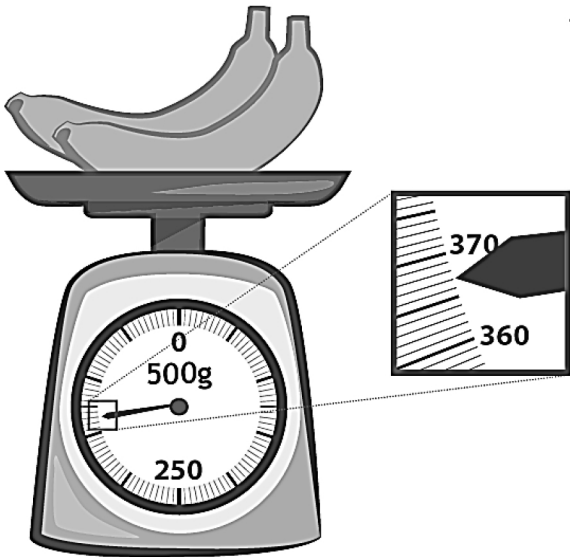


1 gram



1 kilogram

2. Alicia and Jeremy weigh a cell phone on a digital scale. They write down 113 but forget to record the unit. Which unit of measurement is correct, grams or kilograms? How do you know?

3. Read and write the weights below. Write the word *kilogram* or *gram* with the measurement.



## Answer Key

1. Water bottle—1 kilogram  
Paper clip—1 gram  
4 pennies—10 grams  
Apple—100 grams
2. Grams; because 113 kilograms is too heavy for a cell phone
3. 25 kilograms; 9 kilograms; 200 grams  
367 grams; 105 grams